

Name : _____

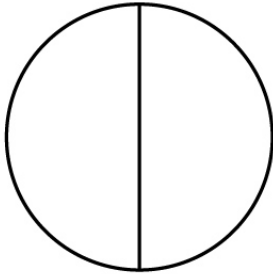
Score : _____ Date : _____

Learning Fractions

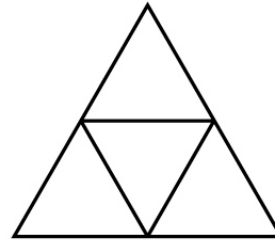
How is each shape divided? Choose the correct answer from the given box.

Halves Thirds Quarters


1




4



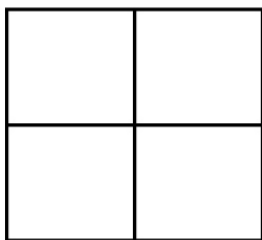
2



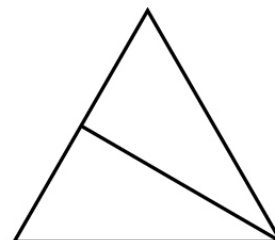
5



3



6



Name : _____

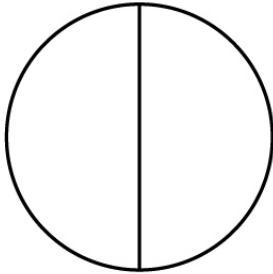
Score : _____ Date : _____

Learning Fractions

Answers

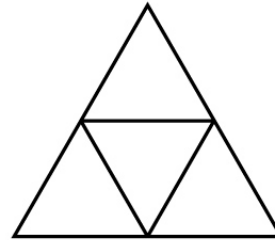
Halves	Thirds	Quarters
--------	--------	----------

1




Halves

4




Quarters

2



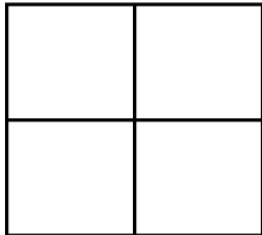
Thirds

5



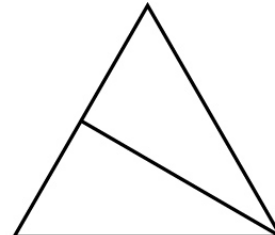
Thirds

3



Quarters

6



Halves