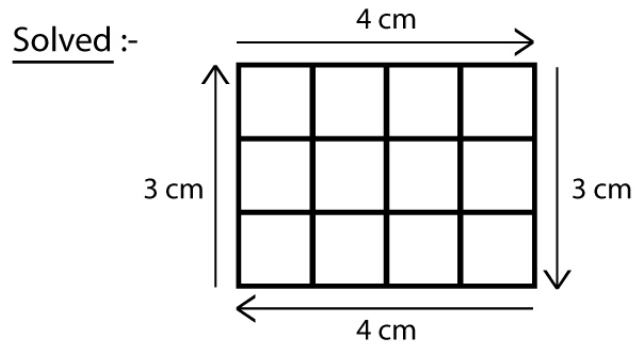


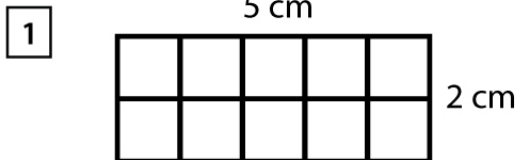
Name : _____

Score : _____ Date : _____

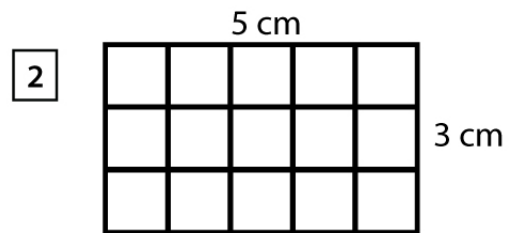
Perimeter of a Rectangle



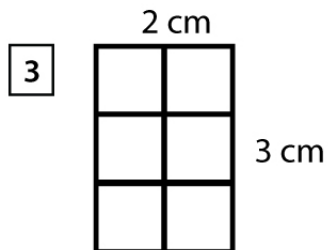
$$\text{Perimeter} = 4 \text{ cm} + 3 \text{ cm} + 4 \text{ cm} + 3 \text{ cm} = 14 \text{ cm}$$



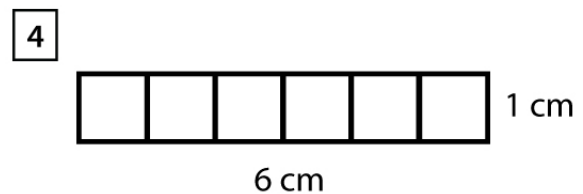
Perimeter = _____ cm



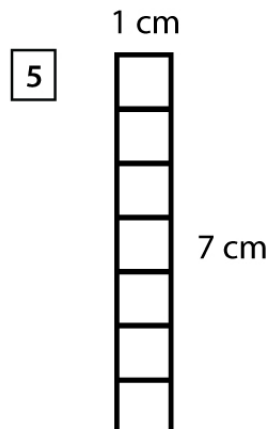
Perimeter = _____ cm



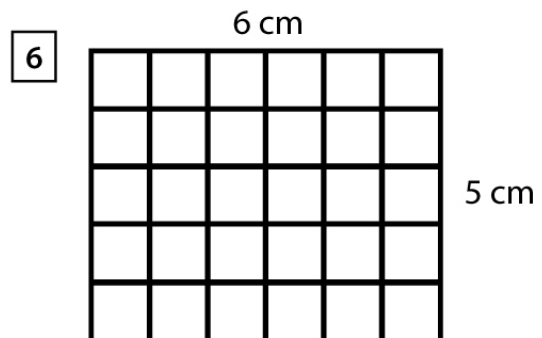
Perimeter = _____ cm



Perimeter = _____ cm



Perimeter = _____ cm



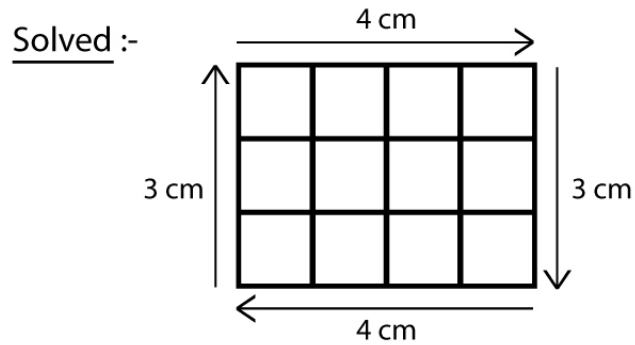
Perimeter = _____ cm

Name : _____

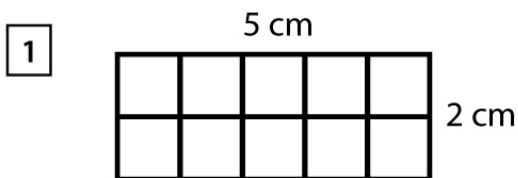
Score : _____ Date : _____

Perimeter of a Rectangle

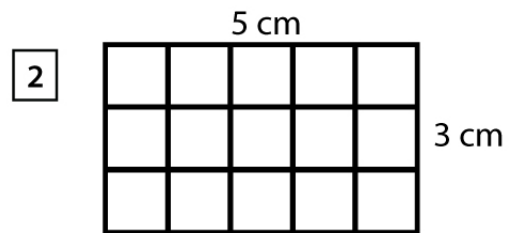
Answers



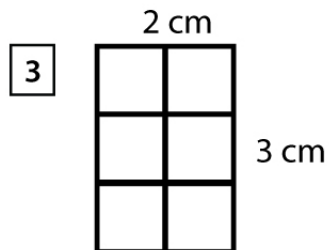
$$\text{Perimeter} = 4 \text{ cm} + 3 \text{ cm} + 4 \text{ cm} + 3 \text{ cm} = 14 \text{ cm}$$



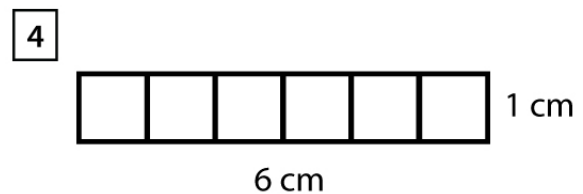
$$\text{Perimeter} = \underline{14} \text{ cm}$$



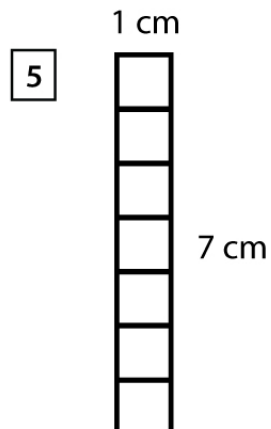
$$\text{Perimeter} = \underline{16} \text{ cm}$$



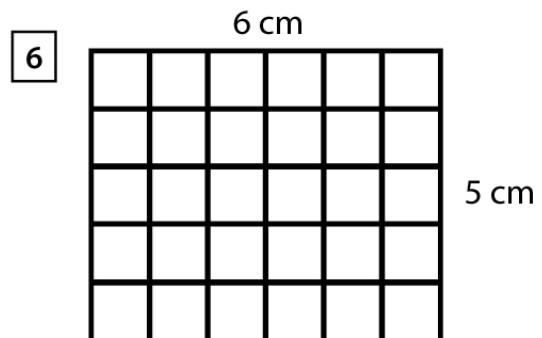
$$\text{Perimeter} = \underline{10} \text{ cm}$$



$$\text{Perimeter} = \underline{14} \text{ cm}$$



$$\text{Perimeter} = \underline{16} \text{ cm}$$



$$\text{Perimeter} = \underline{22} \text{ cm}$$