


# Telling Time

## Hour, Half Hour, and Quarter Hour

Tick the correct time shown in the clock.




12 : 00

☐

12 : 30

☐

12 : 45

☐



9 : 15

☐

9 : 30

☐

9 : 00

☐



6 : 45

☐

6 : 30

☐

6 : 15

☐



2 : 00

☐

2 : 30

☐

3 : 00

☐



6 : 00

☐

12 : 00

☐

6 : 30

☐



8 : 00

☐

8 : 15

☐

8 : 45

☐



4 : 15

☐

4 : 30

☐

4 : 45

☐


9 : 15

☐

9 : 30

☐









9 : 45

☐

# Telling Time

## Hour, Half Hour, and Quarter Hour

### Answers

	<p>12 : 00 <input type="checkbox"/></p> <p>12 : 30 <input type="checkbox"/></p> <p>12 : 45 <input checked="" type="checkbox"/></p>		<p>9 : 15 <input type="checkbox"/></p> <p>9 : 30 <input checked="" type="checkbox"/></p> <p>9 : 00 <input type="checkbox"/></p>
	<p>6 : 45 <input type="checkbox"/></p> <p>6 : 30 <input checked="" type="checkbox"/></p> <p>6 : 15 <input type="checkbox"/></p>		<p>2 : 00 <input checked="" type="checkbox"/></p> <p>2 : 30 <input type="checkbox"/></p> <p>3 : 00 <input type="checkbox"/></p>
	<p>6 : 00 <input checked="" type="checkbox"/></p> <p>12 : 00 <input type="checkbox"/></p> <p>6 : 30 <input type="checkbox"/></p>		<p>8 : 00 <input type="checkbox"/></p> <p>8 : 15 <input checked="" type="checkbox"/></p> <p>8 : 45 <input type="checkbox"/></p>
	<p>4 : 15 <input checked="" type="checkbox"/></p> <p>4 : 30 <input type="checkbox"/></p> <p>4 : 45 <input type="checkbox"/></p>		<p>9 : 15 <input checked="" type="checkbox"/></p> <p>9 : 30 <input type="checkbox"/></p> <p>9 : 45 <input type="checkbox"/></p>