


# Telling Time - Word Problems


Solve the following word problems.

- 1 Dan's basketball practice begins at the time shown on the clock. It is a 3 hour long practice session. At what time does the practice end?




\_\_\_\_\_

- 2 Sara goes for her science tuition at the time shown on the clock, everyday. Her class lasts for 1 hour 45 minutes. At what time does it end?




\_\_\_\_\_

- 3 Meg left for her friend's house at the time shown on the clock. It took her 40 minutes to get there. At what time did Meg reach her friend's house?



\_\_\_\_\_

- 4 Ben goes swimming at the time shown on the clock. He practices for 2 hours 15 minutes. At what time does he finish practice?




\_\_\_\_\_

# Telling Time - Word Problems


## Answers

- 1 Dan's basketball practice begins at the time shown on the clock. It is a 3 hour long practice session. At what time does the practice end?




8 : 30

- 2 Sara goes for her science tuition at the time shown on the clock, everyday. Her class lasts for 1 hour 45 minutes. At what time does it end?




7 : 45

- 3 Meg left for her friend's house at the time shown on the clock. It took her 40 minutes to get there. At what time did Meg reach her friend's house?



10 : 40

- 4 Ben goes swimming at the time shown on the clock. He practices for 2 hours 15 minutes. At what time does he finish practice?



10 : 45