


Name : \_\_\_\_\_


Score : \_\_\_\_\_ Date : \_\_\_\_\_

# Telling Time Worksheet


Match the time shown on the clock with the digital time given on the right.




5:01



9:27



7:15





6:12

Name : \_\_\_\_\_

Score : \_\_\_\_\_ Date : \_\_\_\_\_

# Telling Time Worksheet

Answers.



5:01

9:27

7:15

6:12