




Name : .....

Score : ..... Date : .....

# Telling Time to the Nearest Minute

Cut out the time below and place it alongside the correct clock.




9 : 05	2 : 50	10 : 37	6 : 15	2 : 32
1 : 26				

Name : .....

Score : ..... Date : .....

# Telling Time to the Nearest Minute

## Answers




10 : 37




2 : 32



2 : 50



1 : 26



6 : 15



9 : 05



9 : 05	2 : 50	10 : 37	6 : 15	2 : 32
1 : 26				