

Name : _____

Score : _____ Date : _____

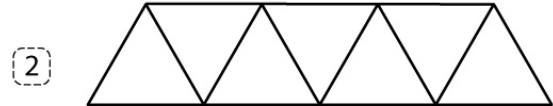
UNIT FRACTIONS

Count the number of equal parts in each figure. Shade one part. Write its unit fraction.



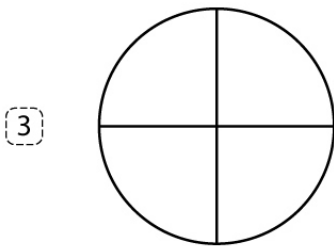
_____ equal parts

Unit fraction =



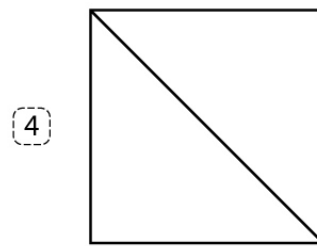
_____ equal parts

Unit fraction =



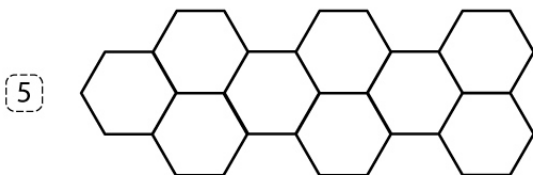
_____ equal parts

Unit fraction =



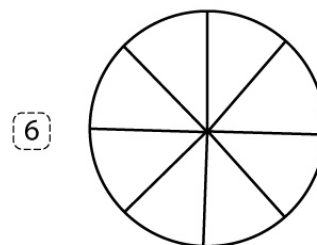
_____ equal parts

Unit fraction =



_____ equal parts

Unit fraction =



_____ equal parts

Unit fraction =

Name : _____

Score : _____ Date : _____

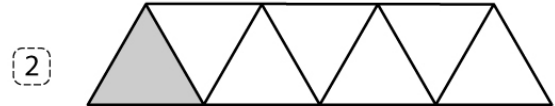
UNIT FRACTIONS

Answers.



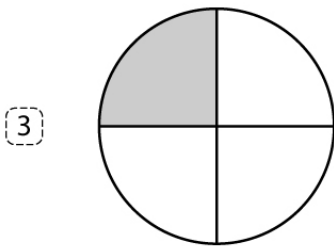
5 equal parts

Unit fraction = $\frac{1}{5}$



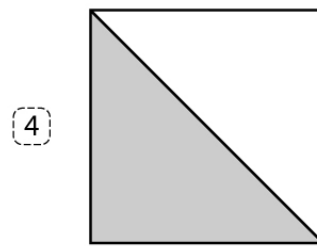
7 equal parts

Unit fraction = $\frac{1}{7}$



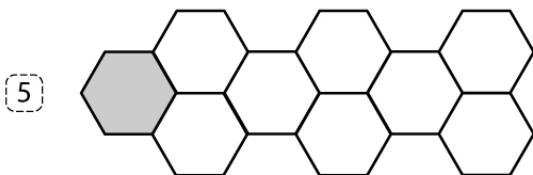
4 equal parts

Unit fraction = $\frac{1}{4}$



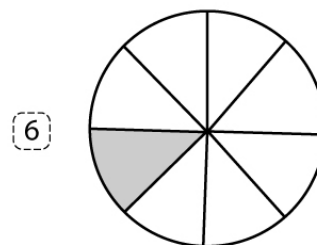
2 equal parts

Unit fraction = $\frac{1}{2}$



9 equal parts

Unit fraction = $\frac{1}{9}$



8 equal parts

Unit fraction = $\frac{1}{8}$