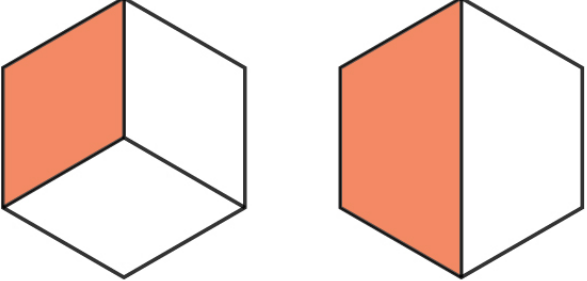
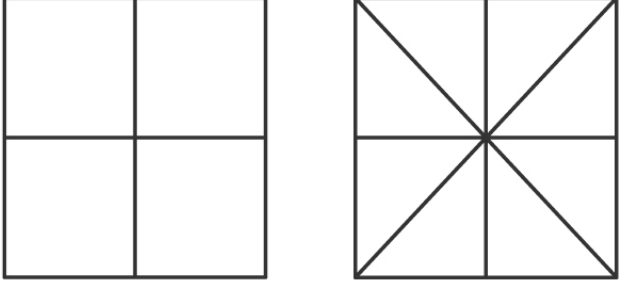
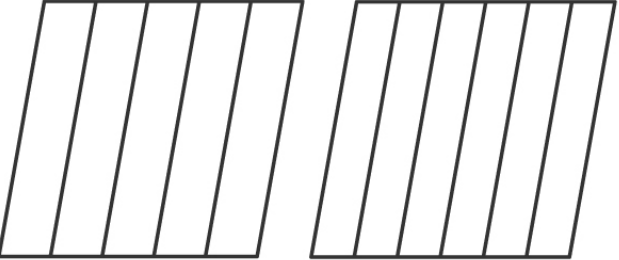
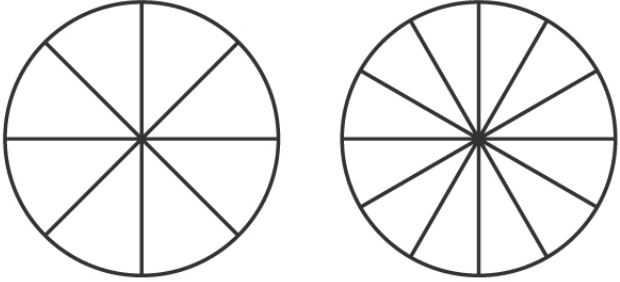
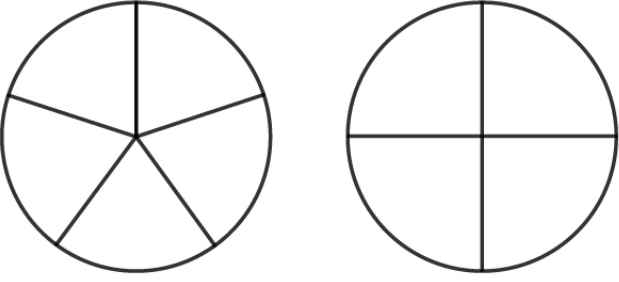
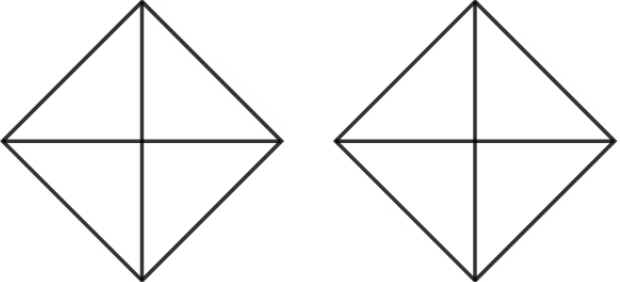


Name : _____

Score : _____ Date : _____

Shading and Comparing Fractions

Shade and use $>$, $<$, or $=$ to compare the fractions.

 $\frac{1}{3}$ <input type="text" value="<"/> $\frac{1}{2}$	 $\frac{3}{4}$ <input type="text"/> $\frac{2}{8}$
 $\frac{2}{5}$ <input type="text"/> $\frac{4}{6}$	 $\frac{3}{8}$ <input type="text"/> $\frac{6}{12}$
 $\frac{2}{5}$ <input type="text"/> $\frac{2}{4}$	 $\frac{3}{4}$ <input type="text"/> $\frac{1}{4}$

Name : _____

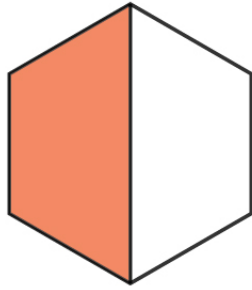
Score : _____ Date : _____

Shading and Comparing Fractions


Answers



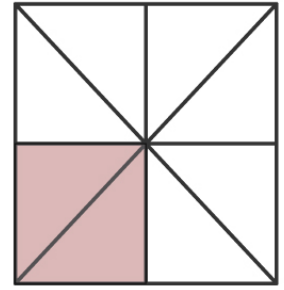
$\frac{1}{3}$



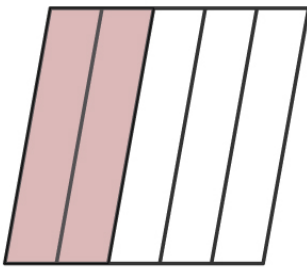
$\frac{1}{2}$



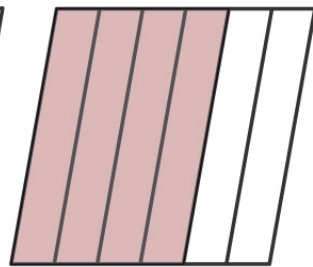
$\frac{3}{4}$



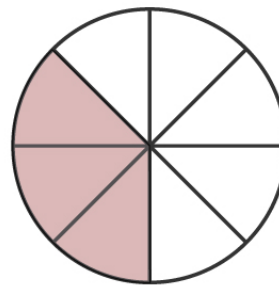
$\frac{2}{8}$



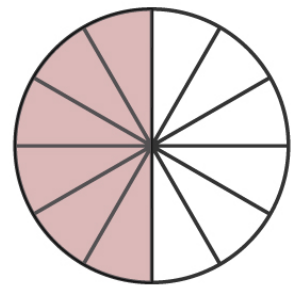
$\frac{2}{5}$



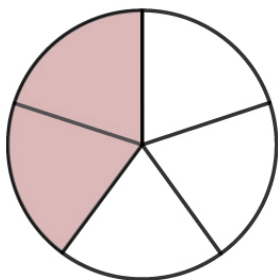
$\frac{4}{6}$



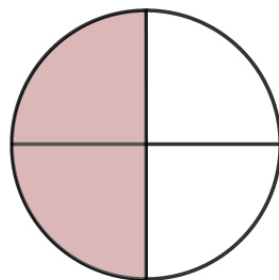
$\frac{3}{8}$



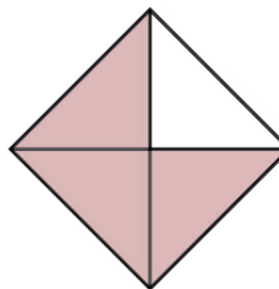
$\frac{6}{12}$



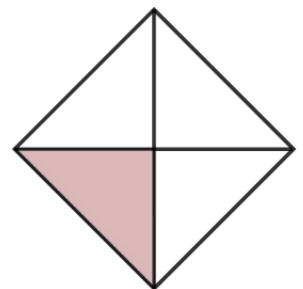
$\frac{2}{5}$



$\frac{2}{4}$



$\frac{3}{4}$



$\frac{1}{4}$