

Name :

Score: Date:

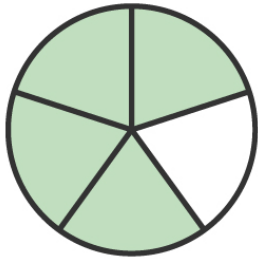
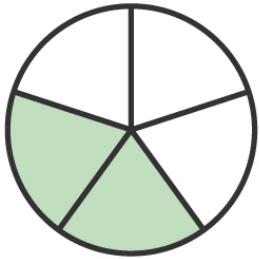
Color and Compare the Fractions

Color each circle to match the written fraction.
Compare the fractions by writing < or > sign.

$\frac{2}{5}$


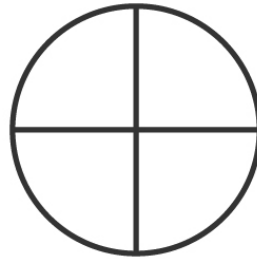
<

$\frac{4}{5}$



$\frac{1}{4}$

$\frac{3}{4}$





$\frac{1}{3}$

$\frac{2}{3}$





$\frac{6}{7}$

$\frac{5}{7}$





$\frac{5}{6}$

$\frac{4}{6}$



$\frac{5}{8}$

$\frac{7}{8}$



Name:

Score: Date:

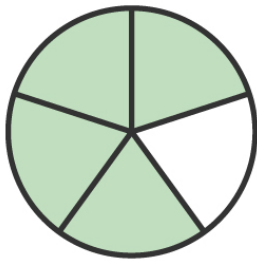
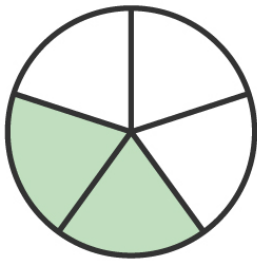
Color and Compare the Fractions

Answers

$\frac{2}{5}$

<

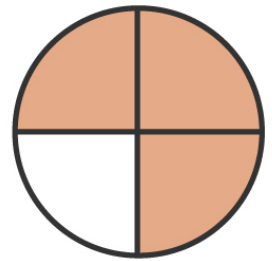
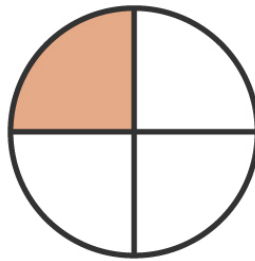
$\frac{4}{5}$



$\frac{1}{4}$

<

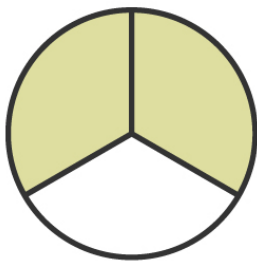
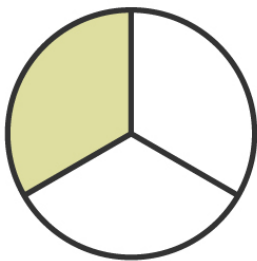
$\frac{3}{4}$



$\frac{1}{3}$

<

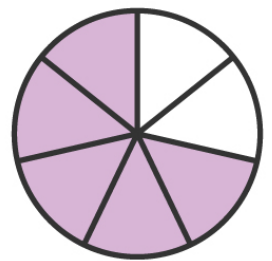
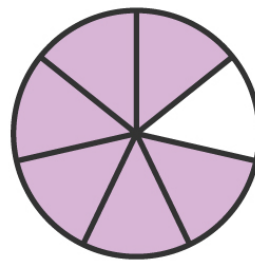
$\frac{2}{3}$



$\frac{6}{7}$

>

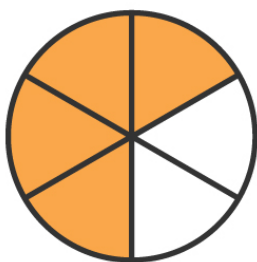
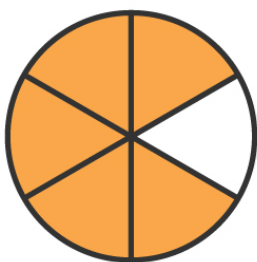
$\frac{5}{7}$



$\frac{5}{6}$

>

$\frac{4}{6}$



$\frac{5}{8}$

<

$\frac{7}{8}$

