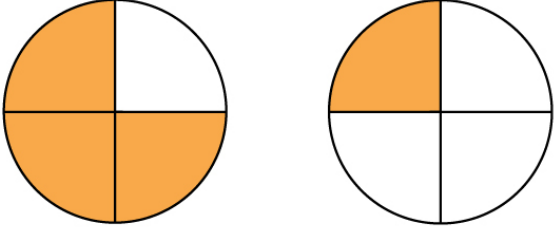
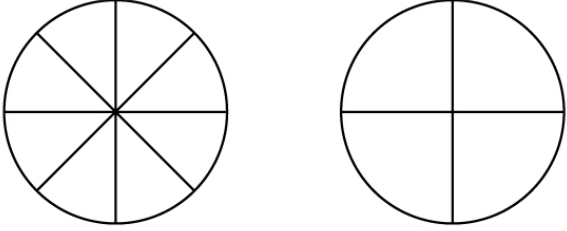
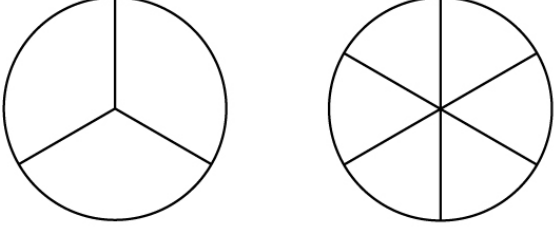
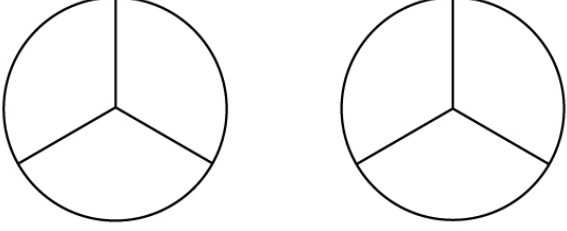
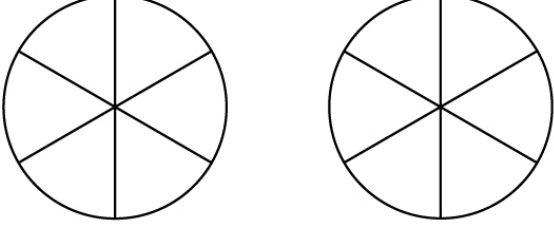
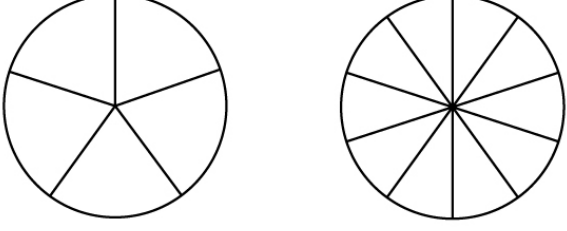
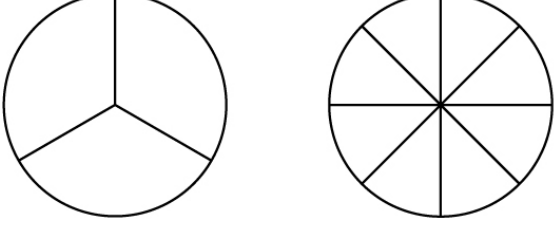
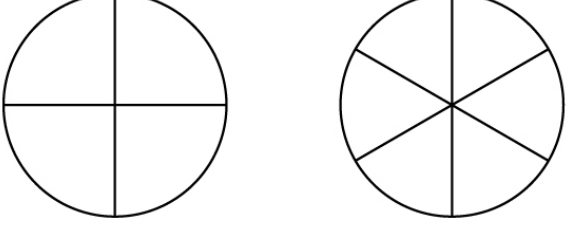


Name : \_\_\_\_\_

# Comparing Fractions

Shade the fraction models. Compare with  $<$ ,  $>$  or  $=$  sign.

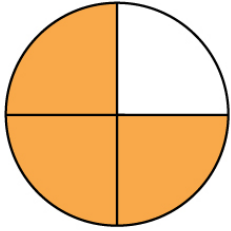
<p>1</p>  <p><math>\frac{3}{4}</math> <input type="checkbox"/> <math>&gt;</math> <input type="checkbox"/> <math>\frac{1}{4}</math></p>	<p>2</p>  <p><math>\frac{2}{8}</math> <input type="checkbox"/> <input type="checkbox"/> <math>\frac{1}{4}</math></p>
<p>3</p>  <p><math>\frac{2}{3}</math> <input type="checkbox"/> <input type="checkbox"/> <math>\frac{2}{6}</math></p>	<p>4</p>  <p><math>\frac{1}{3}</math> <input type="checkbox"/> <input type="checkbox"/> <math>\frac{2}{3}</math></p>
<p>5</p>  <p><math>\frac{5}{6}</math> <input type="checkbox"/> <input type="checkbox"/> <math>\frac{2}{6}</math></p>	<p>6</p>  <p><math>\frac{3}{5}</math> <input type="checkbox"/> <input type="checkbox"/> <math>\frac{6}{10}</math></p>
<p>7</p>  <p><math>\frac{2}{3}</math> <input type="checkbox"/> <input type="checkbox"/> <math>\frac{2}{8}</math></p>	<p>8</p>  <p><math>\frac{1}{4}</math> <input type="checkbox"/> <input type="checkbox"/> <math>\frac{1}{6}</math></p>

Name : \_\_\_\_\_

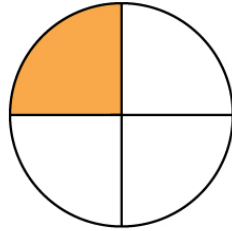
# Comparing Fractions

## Answers

1

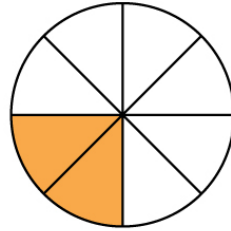


$\frac{3}{4}$

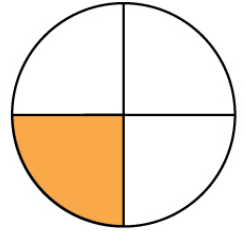


$\frac{1}{4}$

2

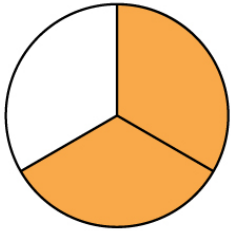


$\frac{2}{8}$

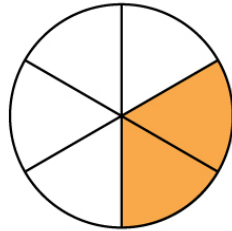


$\frac{1}{4}$

3

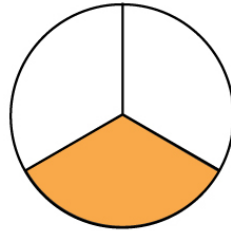


$\frac{2}{3}$

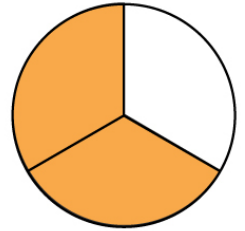


$\frac{2}{6}$

4

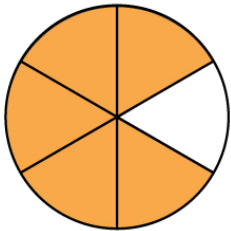


$\frac{1}{3}$

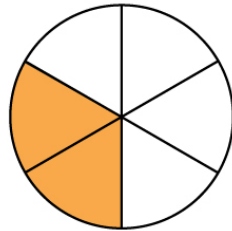


$\frac{2}{3}$

5

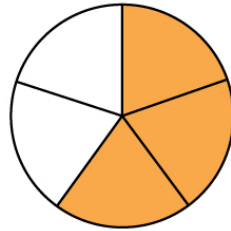


$\frac{5}{6}$

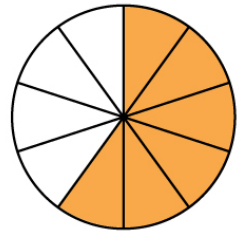


$\frac{2}{6}$

6

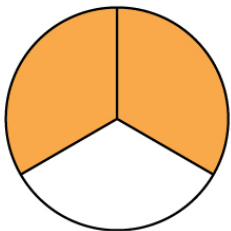


$\frac{3}{5}$

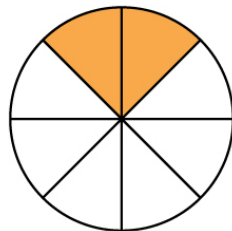


$\frac{6}{10}$

7

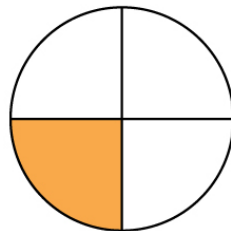


$\frac{2}{3}$

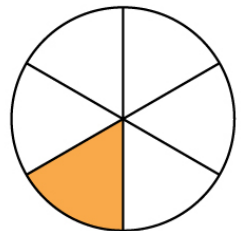


$\frac{2}{8}$

8



$\frac{1}{4}$



$\frac{1}{6}$