

Name : _____

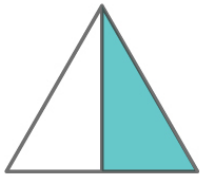
Score : _____ Date : _____

Comparing Fractions

Unlike Denominators



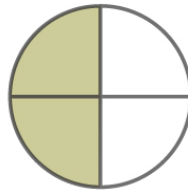
Tick the fractions that are **greater**.



$\frac{1}{2}$



$\frac{1}{3}$



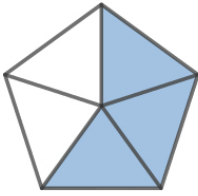
$\frac{2}{4}$



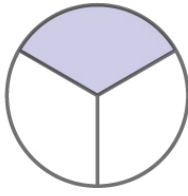
$\frac{2}{3}$



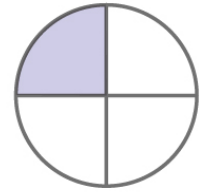
$\frac{3}{10}$



$\frac{3}{5}$



$\frac{1}{3}$



$\frac{1}{4}$

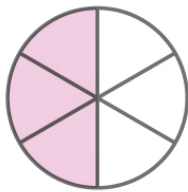
Tick the fractions that are **smaller**.



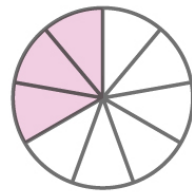
$\frac{4}{9}$



$\frac{4}{8}$



$\frac{3}{6}$



$\frac{3}{9}$



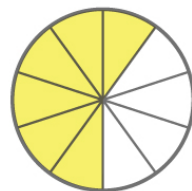
$\frac{2}{7}$



$\frac{2}{14}$



$\frac{6}{15}$



$\frac{6}{10}$

Name : _____

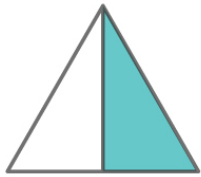
Score : _____ Date : _____

Comparing Fractions

Unlike Denominators



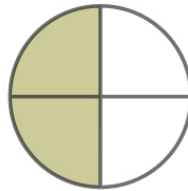
Answers



$\frac{1}{2}$



$\frac{1}{3}$



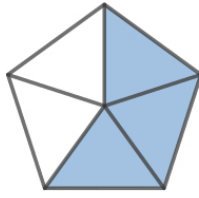
$\frac{2}{4}$



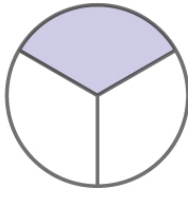
$\frac{2}{3}$



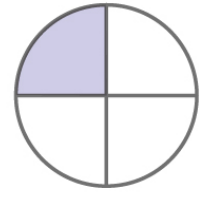
$\frac{3}{10}$



$\frac{3}{5}$



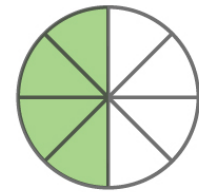
$\frac{1}{3}$



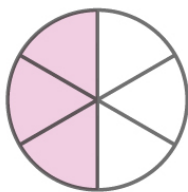
$\frac{1}{4}$



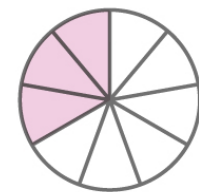
$\frac{4}{9}$



$\frac{4}{8}$



$\frac{3}{6}$



$\frac{3}{9}$



$\frac{2}{7}$



$\frac{2}{14}$



$\frac{6}{15}$



$\frac{6}{10}$