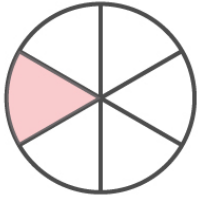


Name : _____

Comparing Unit Fractions

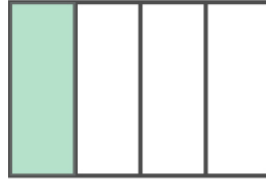
Write the fraction corresponding to each shaded part and compare using $<$, $>$, or $=$.



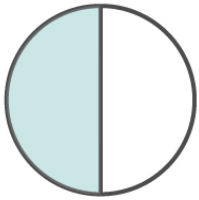
$\frac{1}{6}$




$\frac{1}{8}$

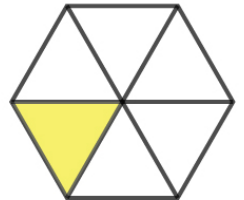
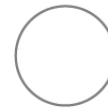


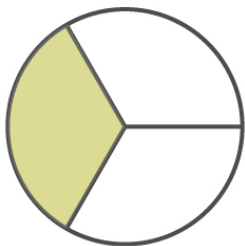






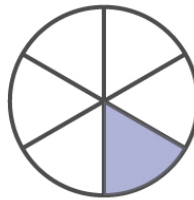


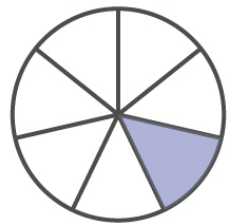
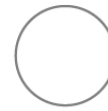








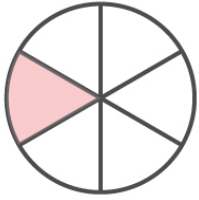




Name : _____

Comparing Unit Fractions

Answers



$\frac{1}{6}$



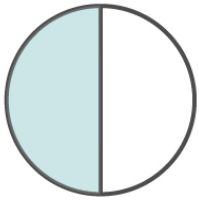
$\frac{1}{8}$



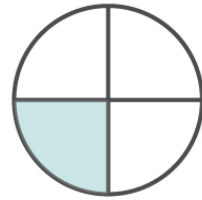
$\frac{1}{4}$



$\frac{1}{5}$



$\frac{1}{2}$



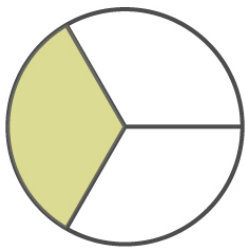
$\frac{1}{4}$




$\frac{1}{9}$



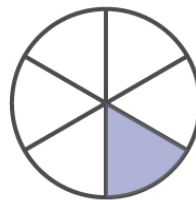
$\frac{1}{6}$



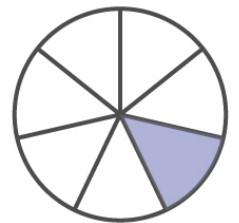
$\frac{1}{3}$



$\frac{1}{6}$



$\frac{1}{6}$



$\frac{1}{7}$