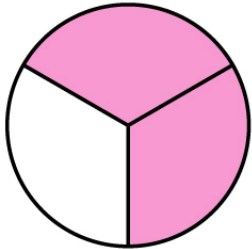
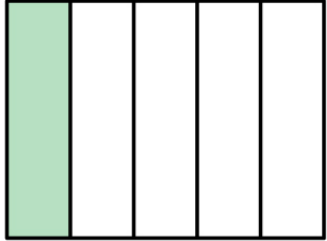
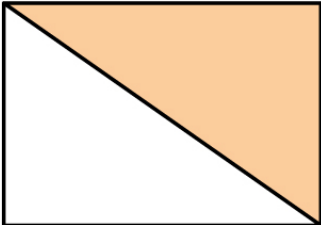
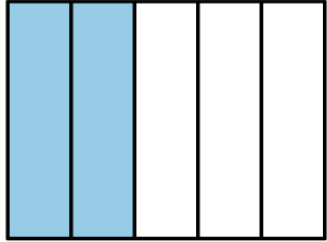
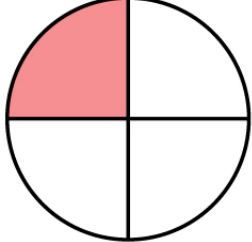


Name : _____

Score : _____ Date : _____

Identifying Fractions

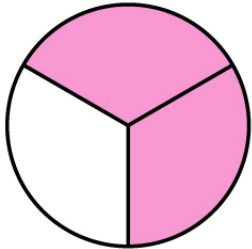
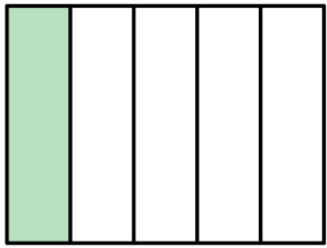
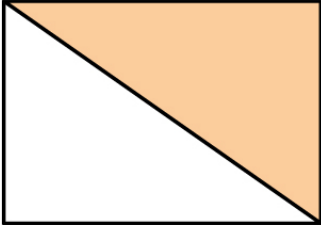
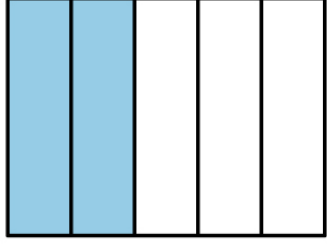
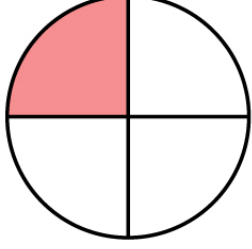
1		<input type="radio"/>	$\frac{1}{2}$	<input checked="" type="radio"/>	$\frac{2}{3}$	<input type="radio"/>	$\frac{3}{4}$	<input type="radio"/>
2		<input type="radio"/>	$\frac{2}{5}$	<input type="radio"/>	$\frac{1}{6}$	<input type="radio"/>	$\frac{1}{5}$	<input type="radio"/>
3		<input type="radio"/>	$\frac{1}{3}$	<input type="radio"/>	$\frac{1}{2}$	<input type="radio"/>	$\frac{3}{4}$	<input type="radio"/>
4		<input type="radio"/>	$\frac{2}{5}$	<input type="radio"/>	$\frac{1}{2}$	<input type="radio"/>	$\frac{1}{2}$	<input type="radio"/>
5		<input type="radio"/>	$\frac{4}{5}$	<input type="radio"/>	$\frac{1}{3}$	<input type="radio"/>	$\frac{1}{4}$	<input type="radio"/>

Name : _____

Score : _____ Date : _____

Identifying Fractions

Answers

1		<input type="radio"/>	$\frac{1}{2}$	<input checked="" type="checkbox"/>	$\frac{2}{3}$	<input type="radio"/>	$\frac{3}{4}$	<input type="radio"/>
2		<input type="radio"/>	$\frac{2}{5}$	<input type="radio"/>	$\frac{1}{6}$	<input checked="" type="checkbox"/>	$\frac{1}{5}$	<input type="radio"/>
3		<input type="radio"/>	$\frac{1}{3}$	<input checked="" type="checkbox"/>	$\frac{1}{2}$	<input type="radio"/>	$\frac{3}{4}$	<input type="radio"/>
4		<input checked="" type="checkbox"/>	$\frac{2}{5}$	<input type="radio"/>	$\frac{1}{2}$	<input type="radio"/>	$\frac{1}{2}$	<input type="radio"/>
5		<input type="radio"/>	$\frac{4}{5}$	<input type="radio"/>	$\frac{1}{3}$	<input checked="" type="checkbox"/>	$\frac{1}{4}$	<input type="radio"/>