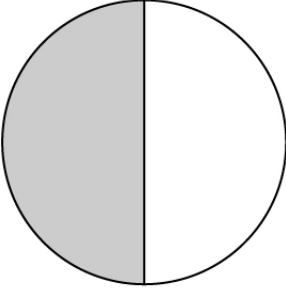

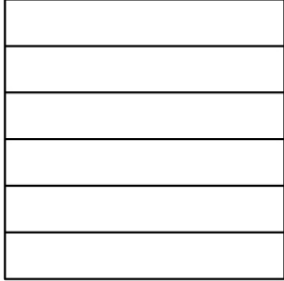
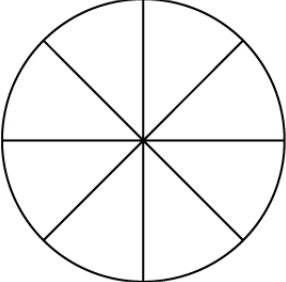
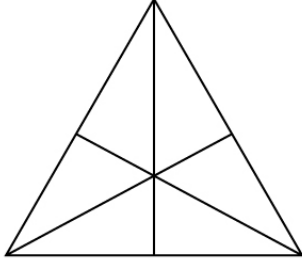
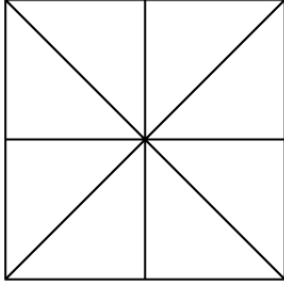
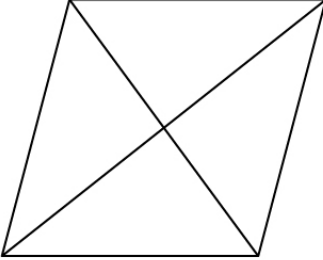
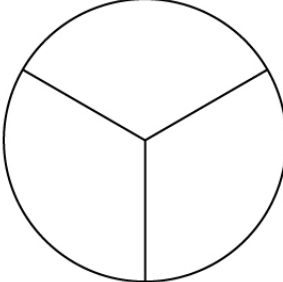
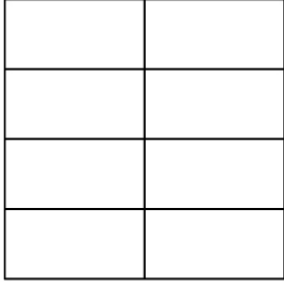
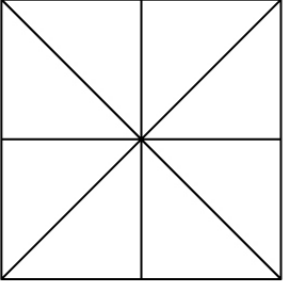
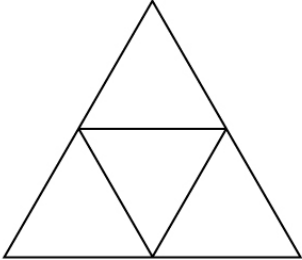
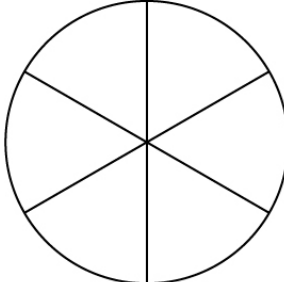


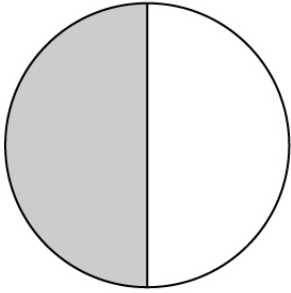
# Shading Fractions

See the fractions and shade the parts of each shape.

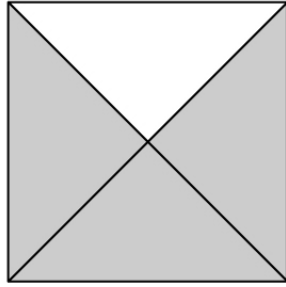
		
$\frac{1}{2}$	$\frac{3}{4}$	$\frac{5}{6}$
		
$\frac{5}{8}$	$\frac{3}{6}$	$\frac{3}{8}$
		
$\frac{1}{4}$	$\frac{2}{3}$	$\frac{6}{8}$
		
$\frac{7}{8}$	$\frac{2}{4}$	$\frac{5}{6}$

# Shading Fractions


## Answers



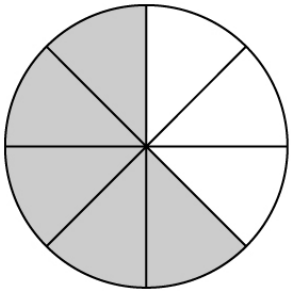
$$\frac{1}{2}$$



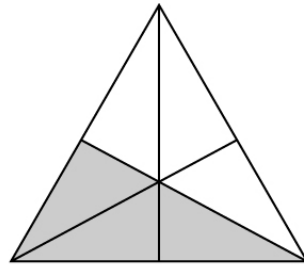
$$\frac{3}{4}$$



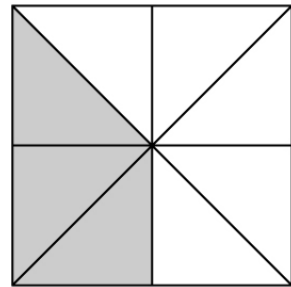
$$\frac{5}{6}$$



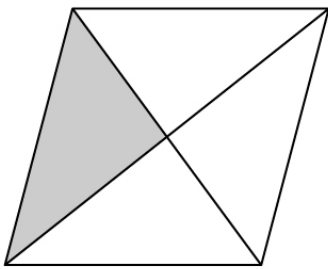
$$\frac{5}{8}$$



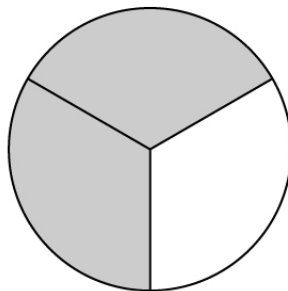
$$\frac{3}{6}$$



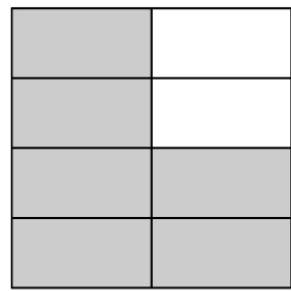
$$\frac{3}{8}$$



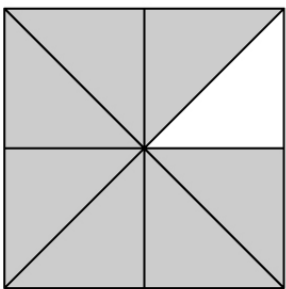
$$\frac{1}{4}$$



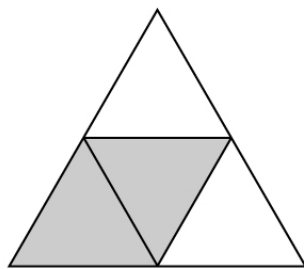
$$\frac{2}{3}$$



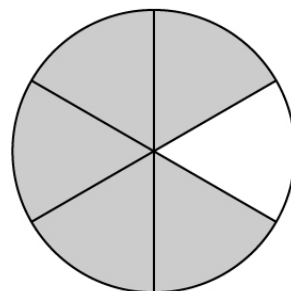
$$\frac{6}{8}$$



$$\frac{7}{8}$$



$$\frac{2}{4}$$



$$\frac{5}{6}$$