


Name : _____

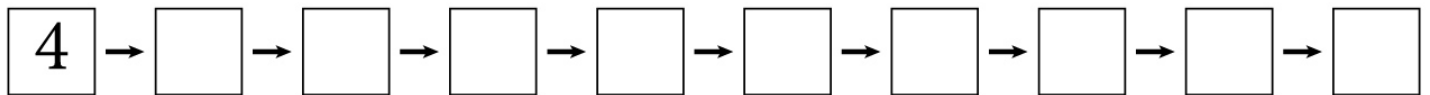
Score : _____ Date : _____



Multiply by 4



Skip count by 4s.



Complete the multiplication table.

×	1	2	3	4	5	6	7	8	9	10
4										

Write the missing numbers using the multiplication table of 4.

1 $4 \times \underline{\quad} = 20$

4 $\underline{\quad} \times 8 = 32$

2 $\underline{\quad} \times 6 = 24$

5 $7 \times \underline{\quad} = 28$

3 $\underline{\quad} \times 4 = 40$

6 $4 \times \underline{\quad} = 36$

Compare and give the sign, '<', '>', or '='.

7 $9 \times 4 \square 32$


9 $7 \times 4 \square 9 \times 4$

8 $10 \times 4 \square 40$

10 $1 \times 4 \square 3 \times 4$

Name : _____

Score : _____ Date : _____



Multiply by 4

Answers



4 → 8 → 12 → 16 → 20 → 24 → 28 → 32 → 36 → 40

×	1	2	3	4	5	6	7	8	9	10
4	4	8	12	16	20	24	28	32	36	40

1 $4 \times \underline{5} = 20$

4 $\underline{4} \times 8 = 32$

2 $\underline{4} \times 6 = 24$

5 $7 \times \underline{4} = 28$

3 $\underline{10} \times 4 = 40$

6 $4 \times \underline{9} = 36$

7 $9 \times 4 \boxed{>} 32$

9 $7 \times 4 \boxed{<} 9 \times 4$

8 $10 \times 4 \boxed{=} 40$

10 $1 \times 4 \boxed{<} 3 \times 4$