


Multiplication with Arrays


Complete the multiplication equation that describe each array.




$$\underline{3} \times \square = \underline{6}$$




$$\underline{4} \times \square = \underline{16}$$




$$\square \times \underline{3} = \underline{9}$$



$$\underline{5} \times \square = \underline{15}$$




$$\underline{4} \times \square = \underline{20}$$



$$\square \times \underline{4} = \underline{20}$$

Multiplication with Arrays


Answers




$$\underline{3} \times \underline{2} = \underline{6}$$




$$\underline{4} \times \underline{4} = \underline{16}$$




$$\underline{3} \times \underline{3} = \underline{9}$$



$$\underline{5} \times \underline{3} = \underline{15}$$



$$\underline{4} \times \underline{5} = \underline{20}$$



$$\underline{5} \times \underline{4} = \underline{20}$$