


Multiplication Worksheet


Change the given arrays into multiplication sentences.

1




$$\underline{5} \times \underline{2} = \underline{\quad}$$

2



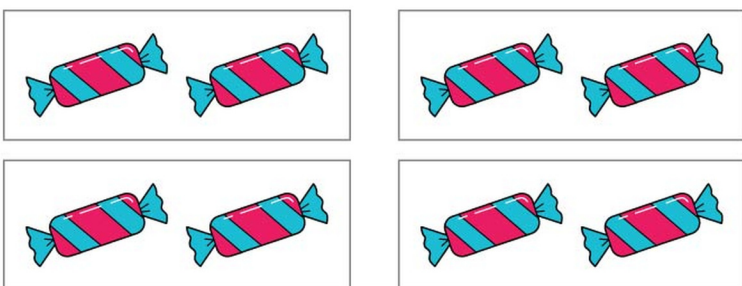
$$\underline{3} \times \underline{2} = \underline{\quad}$$

3



$$\underline{3} \times \underline{4} = \underline{\quad}$$

4




$$\underline{4} \times \underline{2} = \underline{\quad}$$

Multiplication Worksheet

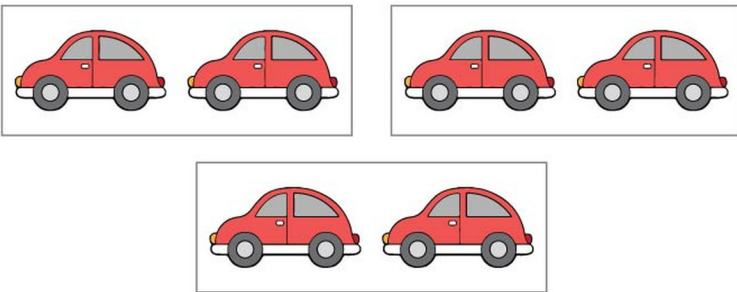
Answers

1




$$\underline{5} \times \underline{2} = \underline{10}$$

2



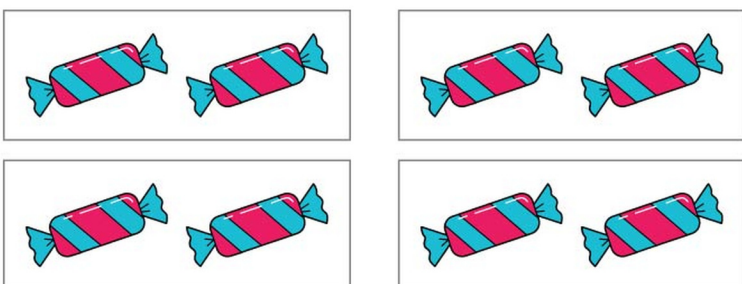
$$\underline{3} \times \underline{2} = \underline{6}$$

3



$$\underline{3} \times \underline{4} = \underline{12}$$

4



$$\underline{4} \times \underline{2} = \underline{8}$$