

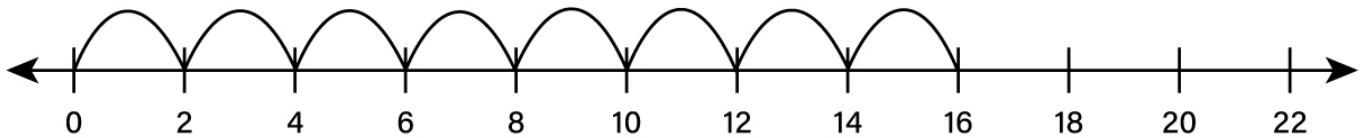
Name : _____

Multiplication Using Number Line

Indicate hops on each number line and complete the multiplication sentences.

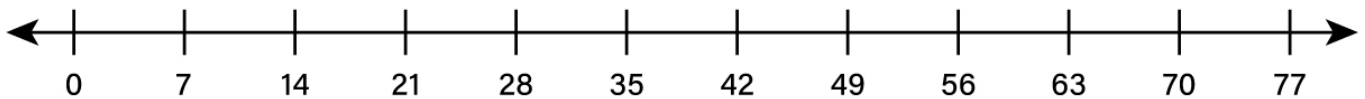
Example

$$8 \times 2 = \underline{16}$$



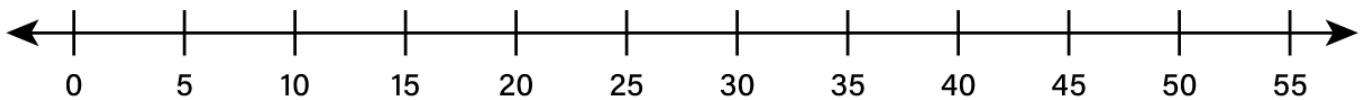
1

$$2 \times 7 = \underline{\quad}$$



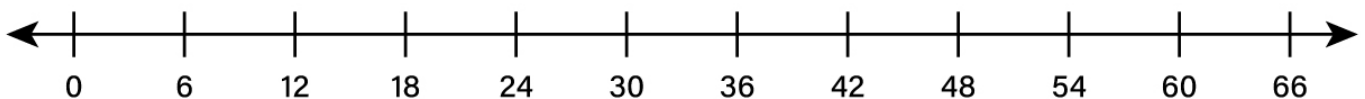
2

$$3 \times 5 = \underline{\quad}$$



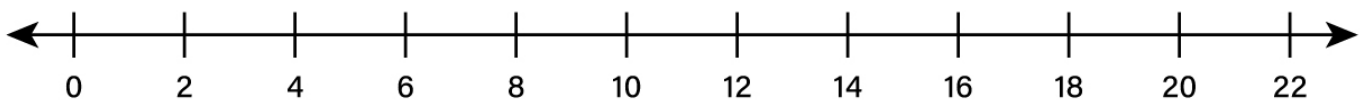
3

$$4 \times 6 = \underline{\quad}$$



4

$$5 \times 2 = \underline{\quad}$$



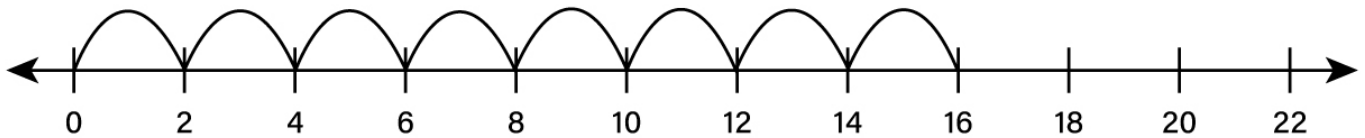
Name : _____

Multiplication Using Number Line

Answers

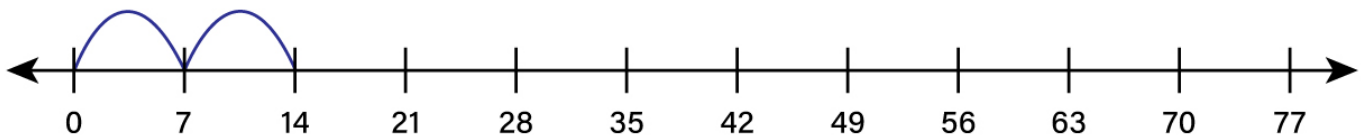
Example

$$8 \times 2 = \underline{16}$$



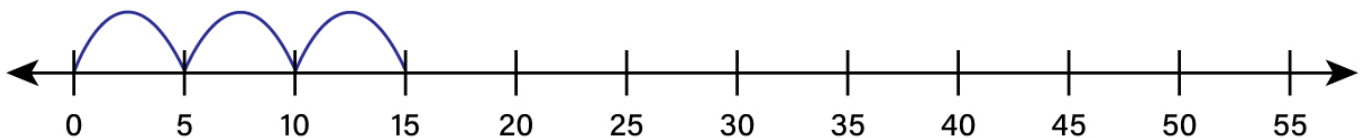
1

$$2 \times 7 = \underline{14}$$



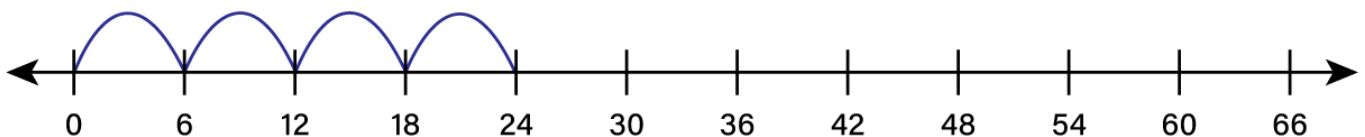
2

$$3 \times 5 = \underline{15}$$



3

$$4 \times 6 = \underline{24}$$



4

$$5 \times 2 = \underline{10}$$

