

Learning to Count Money

Count the money and write the total amount in dollars(\$).

1


\$ _____



A row of five coins: a quarter, a dime, a nickel, a dime, and a penny.

2


\$ _____



A row of one quarter, one one-dollar bill, and three dimes.

3

\$ _____



A row of one five-dollar bill, one one-dollar bill, one dime, one nickel, and one penny.

4


\$ _____



A row of two one-dollar bills, one dime, one quarter, and one nickel.

5


\$ _____



A row of one one-dollar bill, one quarter, one dime, one dime, and one penny.

6

\$ _____



A row of one quarter, one five-dollar bill, one penny, and one dime.

Learning to Count Money

Answers

1

\$0.46



2

\$1.50



3

\$6.16



4

\$2.40



5

\$1.36



6

\$5.36

