




Name : _____ Date : _____

Identifying Coins

Write the name of the coins given in the pictures using the word box given below.



Word Box

Dime Penny Quarter Nickel Half dollar

Name : _____

Date : _____

Identifying Coins

Answers



Nickel



Dime



Quarter



Half Dollar



Nickel



Half Dollar



Nickel



Penny



Quarter

Word Box

Dime

Penny

Quarter

Nickel

Half dollar