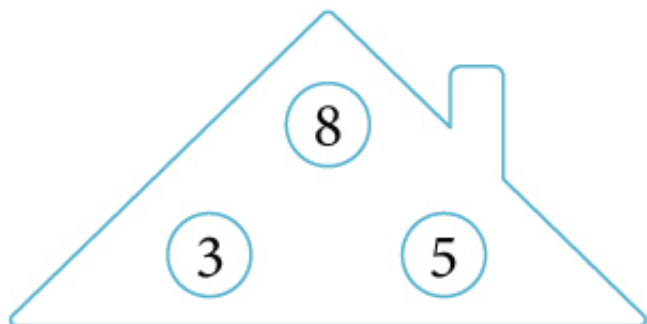


Name:

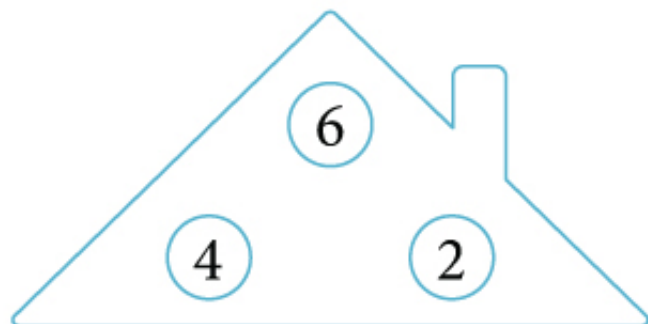
Date: Score:

Fact Family

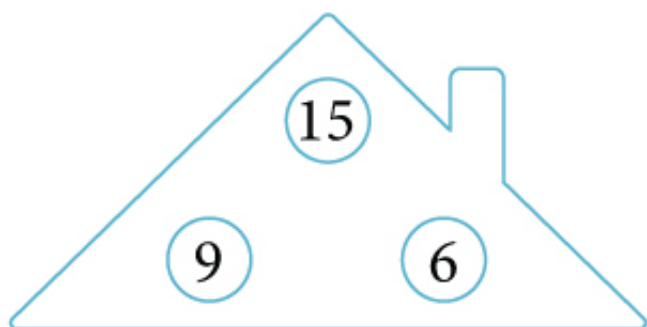
Fill in the missing numbers in the given fact families.



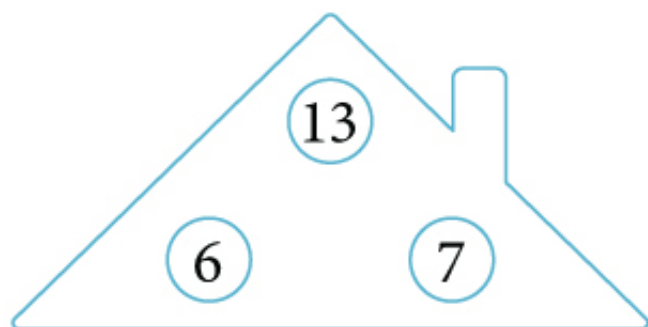
$$\square + \square = \square$$
$$\square + \square = \square$$
$$\square - \square = \square$$
$$\square - \square = \square$$



$$\square + \square = \square$$
$$\square + \square = \square$$
$$\square - \square = \square$$
$$\square - \square = \square$$



$$\square + \square = \square$$
$$\square + \square = \square$$
$$\square - \square = \square$$
$$\square - \square = \square$$



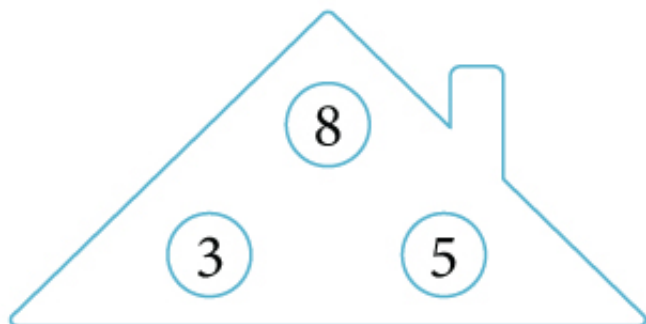
$$\square + \square = \square$$
$$\square + \square = \square$$
$$\square - \square = \square$$
$$\square - \square = \square$$

Name:

Date: Score:

Fact Family

Answers

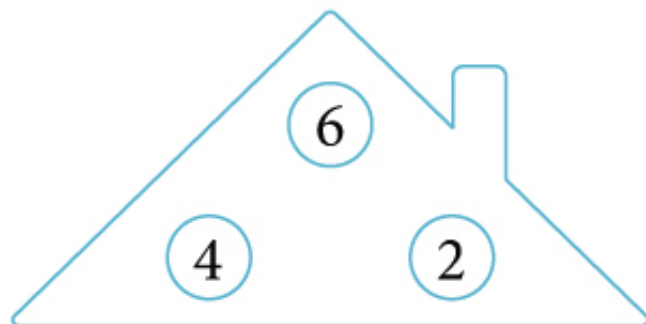


$$3 + 5 = 8$$

$$5 + 3 = 8$$

$$8 - 3 = 5$$

$$8 - 5 = 3$$

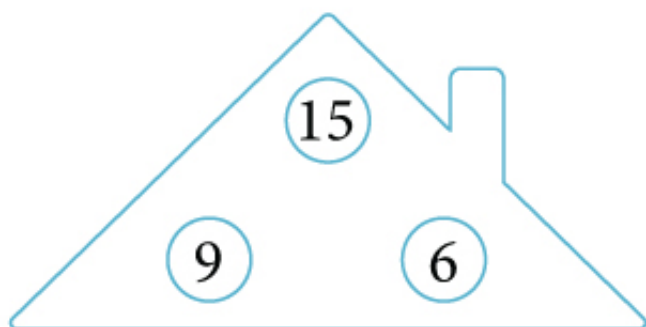


$$4 + 2 = 6$$

$$2 + 4 = 6$$

$$6 - 4 = 2$$

$$6 - 2 = 4$$

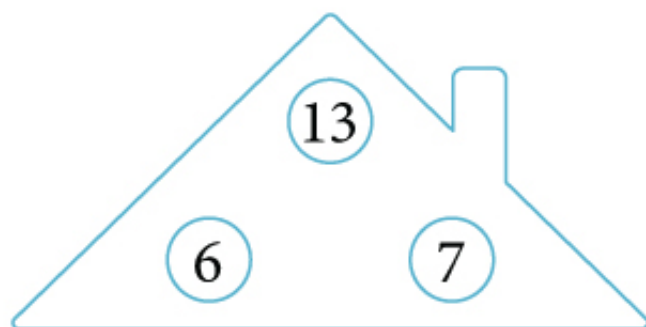


$$9 + 6 = 15$$

$$6 + 9 = 15$$

$$15 - 9 = 6$$

$$15 - 6 = 9$$



$$6 + 7 = 13$$

$$7 + 6 = 13$$

$$13 - 6 = 7$$

$$13 - 7 = 6$$