

Menu Math Worksheet


Using the prices given in the menu, find the total amount spent for buying the items in each box.

Menu




- \$0.95

Cake




- \$1.00

Hot Dog



- \$1.10

Hamburger



- \$1.27

French
fries





- \$0.88

Ice-Cream







- \$1.71





Juice



Total
\$



Total
\$



Total
\$

Menu Math Worksheet

Answers

Menu




- \$0.95

Cake



- \$1.00

Hot Dog



- \$1.10

Hamburger



- \$1.27

French
fries



- \$0.88

Ice-Cream








- \$1.71




Juice



Total
\$7.76



Total
\$7.74



Total
\$9.79