



Dime Worksheet



Count the dimes and write the total amount.

 = _____ ¢

 = _____ ¢

 = _____ ¢


 = _____ ¢

 = _____ ¢

 = _____ ¢

 = _____ ¢

Dime Worksheet



 =  = 10¢

Answers



= 20 ¢



= 50 ¢



= 40 ¢



= 60 ¢



= 30 ¢



= 70 ¢



= 120 ¢