













# Pennies and Nickels Worksheet

Count the pennies and nickels to find the total amount in each group.

<p>1</p>  <p>How much? _____ ¢</p>	<p>2</p>  <p>How much? _____ ¢</p>
<p>3</p>  <p>How much? _____ ¢</p>	<p>4</p>  <p>How much? _____ ¢</p>
<p>5</p>  <p>How much? _____ ¢</p>	<p>6</p>  <p>How much? _____ ¢</p>

# Pennies and Nickels Worksheet

## Answers

<p>1</p>  <p>How much? <u>17</u> ¢</p>	<p>2</p>  <p>How much? <u>13</u> ¢</p>
<p>3</p>  <p>How much? <u>18</u> ¢</p>	<p>4</p>  <p>How much? <u>19</u> ¢</p>
<p>5</p>  <p>How much? <u>22</u> ¢</p>	<p>6</p>  <p>How much? <u>23</u> ¢</p>