






# Presidents on Coins

Identify the Presidents of the United States inscribed on the coins. Also, write the values of the coins (in \$ and ¢).

Coin	Name of the President	Value
<p data-bbox="164 495 427 539">Half dollar</p> 	<p data-bbox="572 685 1115 696">_____</p>	<p data-bbox="1219 568 1410 629">\$ _____</p> <p data-bbox="1254 703 1442 763">_____ ¢</p>
<p data-bbox="197 875 395 920">Quarter</p> 	<p data-bbox="572 1050 1115 1061">_____</p>	<p data-bbox="1219 934 1410 994">\$ _____</p> <p data-bbox="1254 1068 1442 1128">_____ ¢</p>
<p data-bbox="229 1232 363 1276">Dime</p> 	<p data-bbox="572 1386 1115 1397">_____</p>	<p data-bbox="1219 1270 1410 1330">\$ _____</p> <p data-bbox="1254 1404 1442 1464">_____ ¢</p>
<p data-bbox="218 1543 375 1588">Nickel</p> 	<p data-bbox="572 1711 1115 1722">_____</p>	<p data-bbox="1219 1597 1410 1657">\$ _____</p> <p data-bbox="1254 1731 1442 1792">_____ ¢</p>
<p data-bbox="218 1888 375 1933">Penny</p> 	<p data-bbox="572 2042 1115 2054">_____</p>	<p data-bbox="1219 1924 1410 1984">\$ _____</p> <p data-bbox="1254 2058 1442 2119">_____ ¢</p>

# Presidents on Coins

## Answers

Coin	Name of the President	Value
Half dollar 	<u>John F. Kennedy</u>	\$ <u>0.50</u> <u>50¢</u>
Quarter 	<u>George Washington</u>	\$ <u>0.25</u> <u>25¢</u>
Dime 	<u>Franklin Roosevelt</u>	\$ <u>0.10</u> <u>10¢</u>
Nickel 	<u>Thomas Jefferson</u>	\$ <u>0.05</u> <u>5¢</u>
Penny 	<u>Abraham Lincoln</u>	\$ <u>0.01</u> <u>1¢</u>