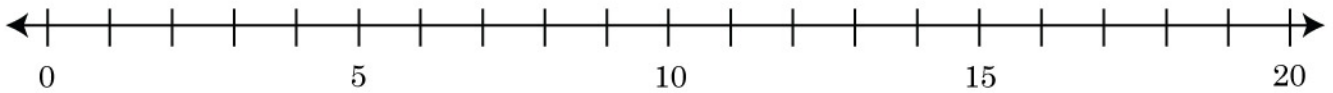


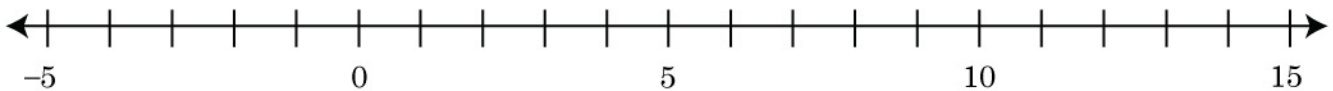
Integers on a Number line

1. Label the given integers on the number line.



- | | | |
|-------|-------|-------|
| a) 4 | d) 19 | g) 14 |
| b) 11 | e) 2 | h) 6 |
| c) 9 | f) 16 | i) 1 |

2. Use the number line to determine the integer being indicated.

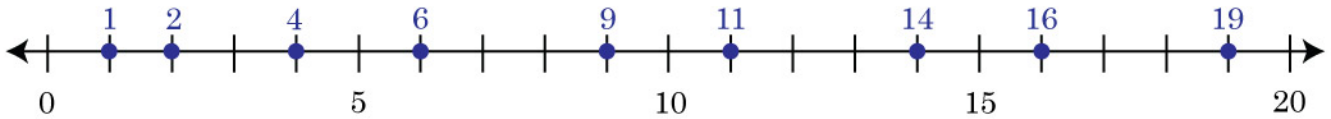


- a) 5 units to the left of 5 = _____
- b) 2 units to the right of 1 = _____
- c) 10 units to the left of 15 = _____
- d) 9 units to the right of 3 = _____
- e) 7 units to the left of 10 = _____
- f) 12 units to the left of 14 = _____

Integers on a Number line

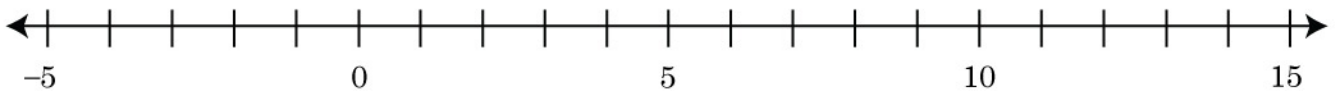
Answers

1. Label the given integers on the number line.



- | | | |
|-------|-------|-------|
| a) 4 | d) 19 | g) 14 |
| b) 11 | e) 2 | h) 6 |
| c) 9 | f) 16 | i) 1 |

2. Use the number line to determine the integer being indicated.



- | | |
|---------------------------------|-----------|
| a) 5 units to the left of 5 = | <u>0</u> |
| b) 2 units to the right of 1 = | <u>3</u> |
| c) 10 units to the left of 15 = | <u>5</u> |
| d) 9 units to the right of 3 = | <u>12</u> |
| e) 7 units to the left of 10 = | <u>3</u> |
| f) 12 units to the left of 14 = | <u>2</u> |