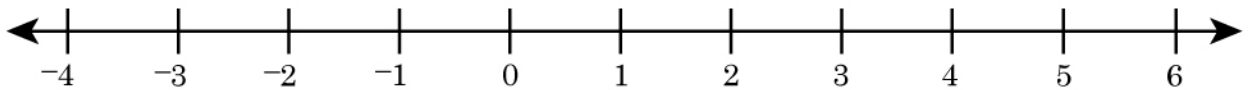


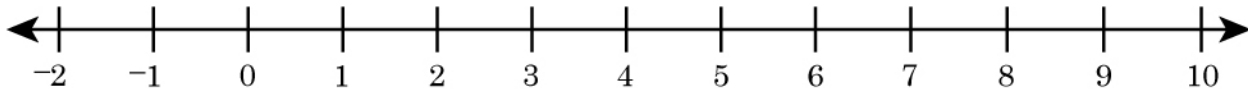
## Graphing Integers on a Number Line

1. Mark the integers on the number line.

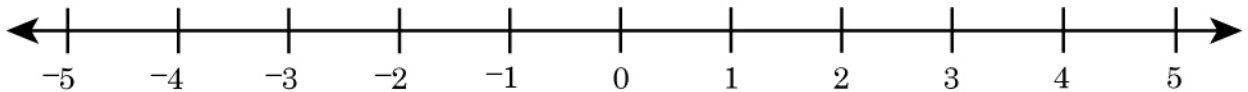
- a) -2    b) -4    c) 1    d) 6



2. a) 5    b) 2    c) -1    d) 8



3. Answer the questions using the number line below.



a) Move 2 units to the left of 1    \_\_\_\_\_

b) Move 5 units to the right of -3    \_\_\_\_\_

c) Move 3 units to the right of -1    \_\_\_\_\_

d) Move 1 unit to the left of 5    \_\_\_\_\_

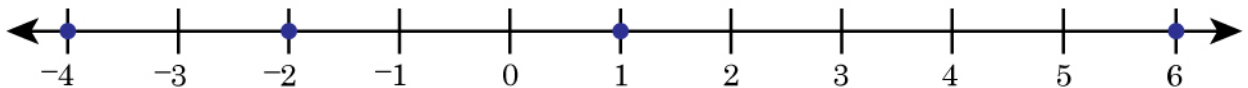
e) Move 6 units to the right of -5    \_\_\_\_\_

# Graphing Integers on a Number Line

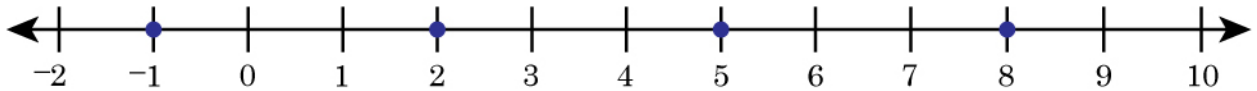
## Answers

1. Mark the integers on the number line.

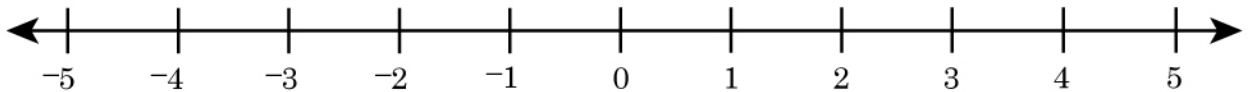
a) -2    b) -4    c) 1    d) 6



2. a) 5    b) 2    c) -1    d) 8



3. Answer the questions using the number line below.



a) Move 2 units to the left of 1          -1    

b) Move 5 units to the right of -3          2    

c) Move 3 units to the right of -1          2    

d) Move 1 unit to the left of 5          4    

e) Move 6 units to the right of -5          1