

Name : _____

Score : _____ Date : _____

Subtracting Integers on a Number Line

Find the difference. Show your answer with the help of the given number line.

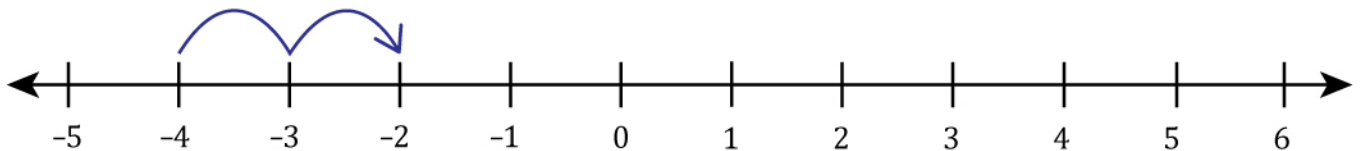
1

$$5 - 3 = \underline{\quad}$$



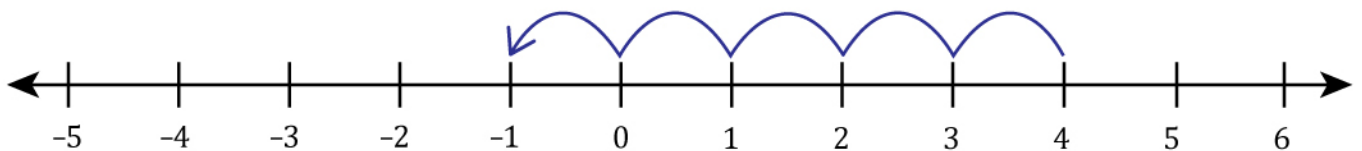
2

$$(-4) - (-2) = \underline{\quad}$$



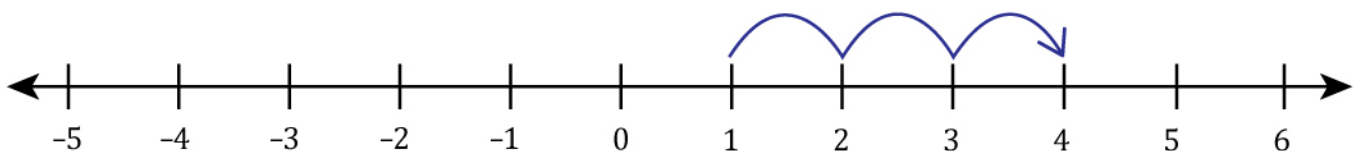
3

$$4 - 5 = \underline{\quad}$$



4

$$1 - (-3) = \underline{\quad}$$



5

$$(-3) - 2 = \underline{\quad}$$



Name :

Score : Date :

Subtracting Integers on a Number Line

Answers

1

$$5 - 3 = \underline{2}$$



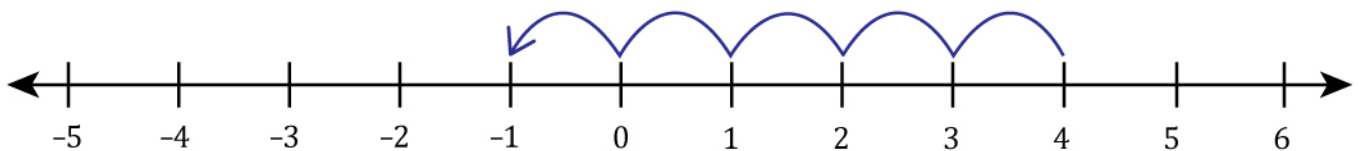
2

$$(-4) - (-2) = \underline{-2}$$



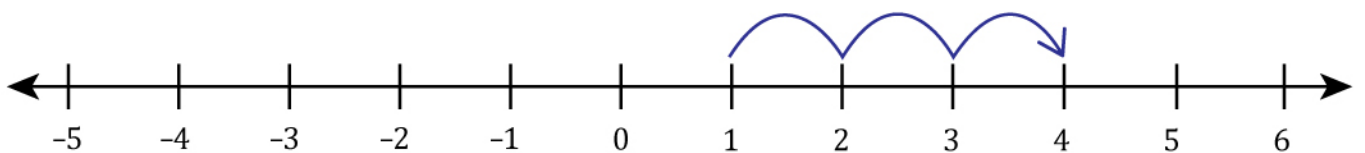
3

$$4 - 5 = \underline{-1}$$



4

$$1 - (-3) = \underline{4}$$



5

$$(-3) - 2 = \underline{-5}$$

