

Name : \_\_\_\_\_ Date : \_\_\_\_\_

# Counting on a Number Line

Add, count by 1 and show on the number line.

Solved

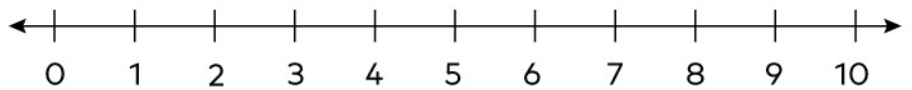
①  $2 + 3 = \underline{5}$



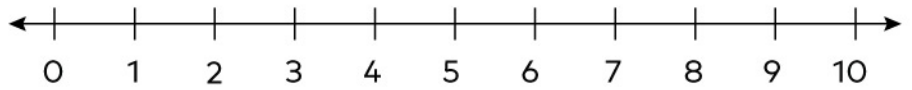
②  $3 + 3 = \underline{\quad}$



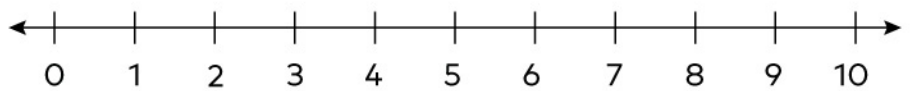
③  $0 + 4 = \underline{\quad}$



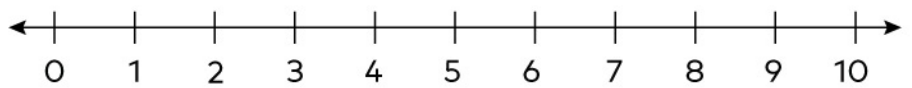
④  $6 + 1 = \underline{\quad}$



⑤  $8 + 2 = \underline{\quad}$



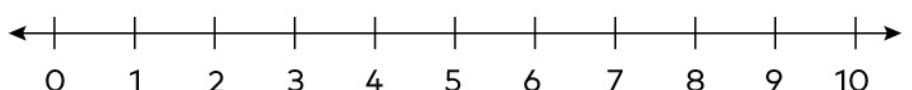
⑥  $4 + 5 = \underline{\quad}$



⑦  $6 + 3 = \underline{\quad}$



⑧  $7 + 3 = \underline{\quad}$

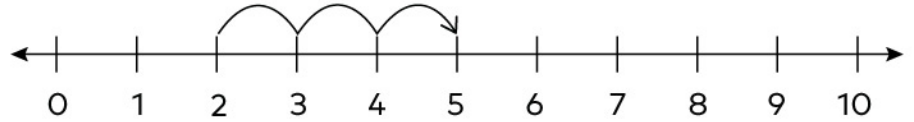


Name : \_\_\_\_\_

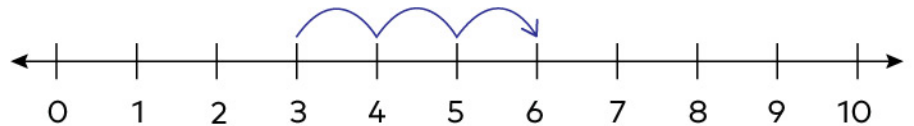
# Counting on a Number Line

## Answers

①  $2 + 3 = \underline{5}$



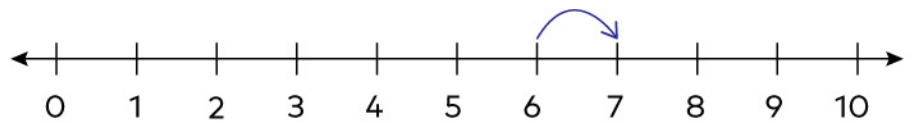
②  $3 + 3 = \underline{6}$



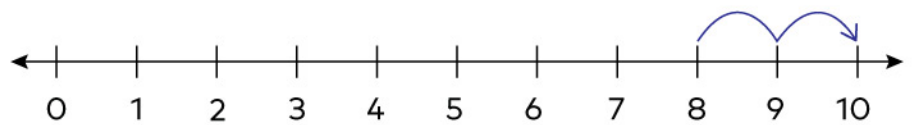
③  $0 + 4 = \underline{4}$



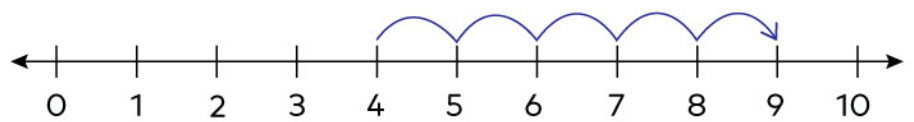
④  $6 + 1 = \underline{7}$



⑤  $8 + 2 = \underline{10}$



⑥  $4 + 5 = \underline{9}$



⑦  $6 + 3 = \underline{9}$



⑧  $7 + 3 = \underline{10}$

