








# Count and Find the Difference



Count the number of objects and write the number in the box provided. Finally, find the difference and draw the same number of objects corresponding to it.



Solved

 <input type="text" value="7"/>	-	 <input type="text" value="3"/>	=	 <input type="text" value="4"/>
---	---	--	---	--

 <input type="text"/>	-	 <input type="text"/>	=	<input type="text"/>
--	---	---	---	----------------------




 <input type="text"/>	-	 <input type="text"/>	=	<input type="text"/>
---	---	--	---	----------------------




 <input type="text"/>	-	 <input type="text"/>	=	<input type="text"/>
---	---	--	---	----------------------




 <input type="text"/>	-	 <input type="text"/>	=	<input type="text"/>
--	---	--	---	----------------------


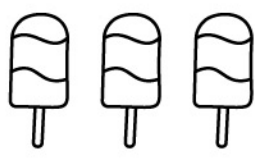
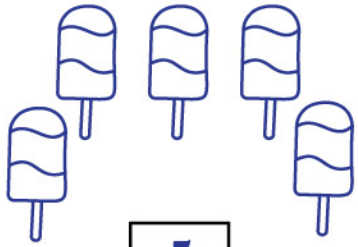
# Count and Find the Difference




## Answers

 <div style="border: 1px solid black; padding: 2px; display: inline-block;">7</div>	-	 <div style="border: 1px solid black; padding: 2px; display: inline-block;">3</div>	=	 <div style="border: 1px solid black; padding: 2px; display: inline-block; margin-top: 10px;">4</div>
---	---	--	---	--

 <div style="border: 1px solid black; padding: 2px; display: inline-block;">10</div>	-	 <div style="border: 1px solid black; padding: 2px; display: inline-block;">2</div>	=	 <div style="border: 1px solid black; padding: 2px; display: inline-block; margin-top: 10px;">8</div>
---	---	---	---	---

 <div style="border: 1px solid black; padding: 2px; display: inline-block;">5</div>	-	 <div style="border: 1px solid black; padding: 2px; display: inline-block;">1</div>	=	 <div style="border: 1px solid black; padding: 2px; display: inline-block; margin-top: 10px;">4</div>
---	---	--	---	--

 <div style="border: 1px solid black; padding: 2px; display: inline-block;">8</div>	-	 <div style="border: 1px solid black; padding: 2px; display: inline-block;">3</div>	=	 <div style="border: 1px solid black; padding: 2px; display: inline-block; margin-top: 10px;">5</div>
---	---	--	---	--

 <div style="border: 1px solid black; padding: 2px; display: inline-block;">4</div>	-	 <div style="border: 1px solid black; padding: 2px; display: inline-block;">3</div>	=	 <div style="border: 1px solid black; padding: 2px; display: inline-block; margin-top: 10px;">1</div>
--	---	--	---	--