


Name :

Score :

Counting With Groups of 10 and Leftovers

1




4 groups of 10 and
9 left overs

2




_____ groups of 10 and
_____ left overs

3



_____ groups of 10 and
_____ left overs

4



_____ groups of 10 and
_____ left overs


Name :

Score :

Counting With Groups of 10 and Leftovers


Answer

1




4 groups of 10 and
9 left overs

2




2 groups of 10 and
4 left overs

3



5 groups of 10 and
5 left overs

4



6 groups of 10 and
7 left overs