

Name: _____

Score: _____ Date: _____

Determine which letter corresponds to each ordered pair in the grid.

$(2, 12) =$ _____ $(13, 3) =$ _____

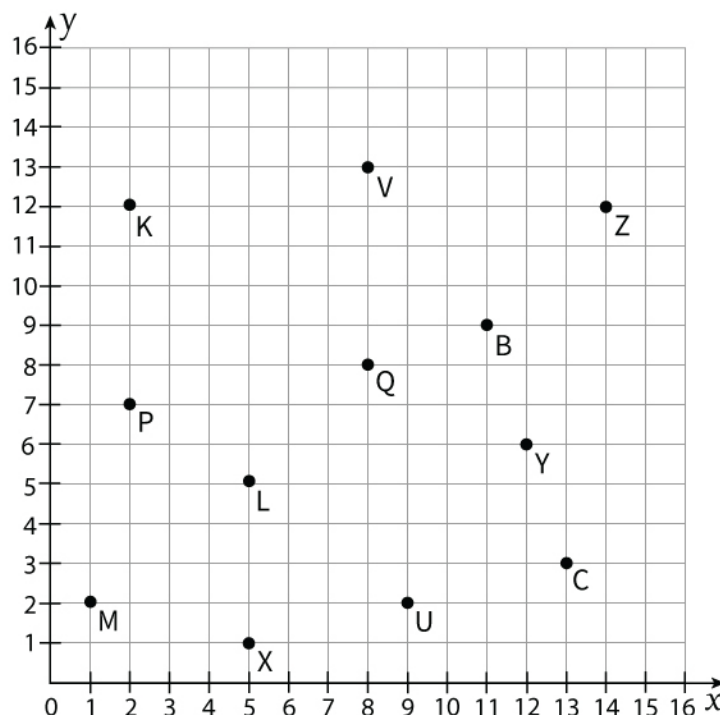
$(2, 7) =$ _____ $(12, 6) =$ _____

$(1, 2) =$ _____ $(8, 8) =$ _____

$(5, 1) =$ _____ $(11, 9) =$ _____

$(5, 5) =$ _____ $(14, 12) =$ _____

$(8, 13) =$ _____ $(9, 2) =$ _____




Draw and fill each shape on the coordinate grid based on their ordered pairs.


a)  at $(10, 9)$

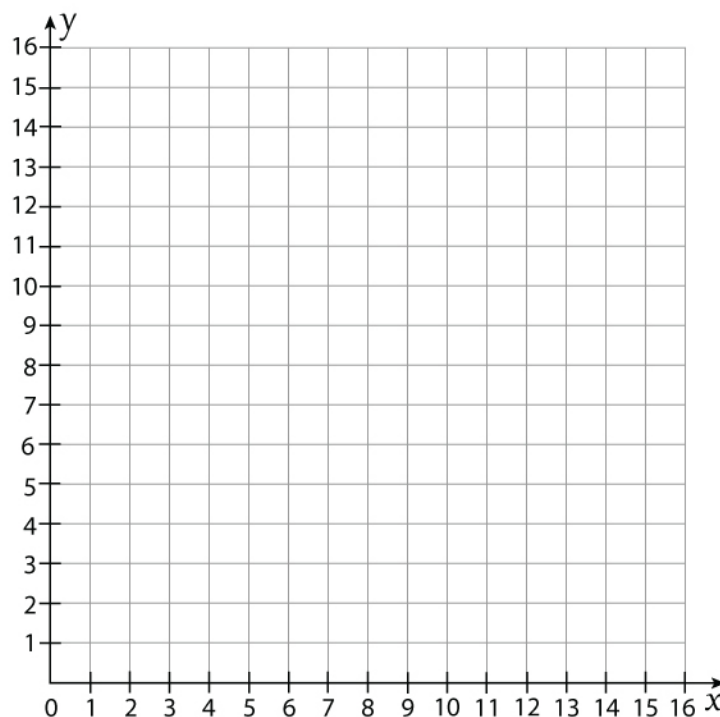
b)  at $(5, 12)$

c)  at $(6, 11)$

d)  at $(14, 3)$

e)  at $(1, 12)$

f)  at $(6, 4)$



Name: _____

Score: _____ Date: _____

Answers

Determine which letter corresponds to each ordered pair in the grid.

$(2, 12) = \underline{K}$

$(13, 3) = \underline{C}$

$(2, 7) = \underline{P}$

$(12, 6) = \underline{Y}$

$(1, 2) = \underline{M}$

$(8, 8) = \underline{Q}$

$(5, 1) = \underline{X}$

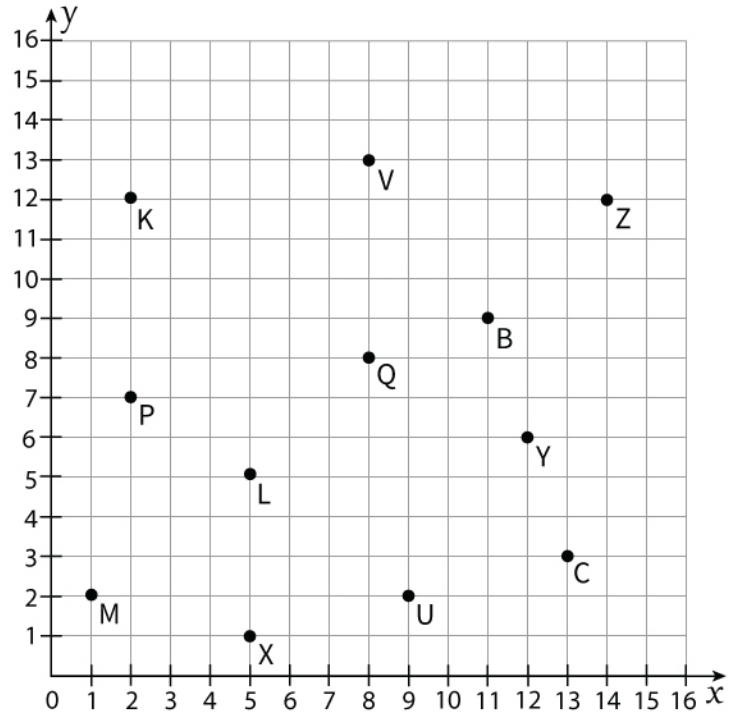
$(11, 9) = \underline{B}$

$(5, 5) = \underline{L}$


$(14, 12) = \underline{Z}$


$(8, 13) = \underline{V}$


$(9, 2) = \underline{U}$




Draw and fill each shape on the coordinate grid based on their ordered pairs.

a)  at (10, 9)

b)  at (5, 12)

c)  at (6, 11)

d)  at (14, 3)

e)  at (1, 12)

f)  at (6, 4)

