

Name:

Score: Date:

Coordinate Plane

1) Write the letter corresponding to each coordinate point on the grid.

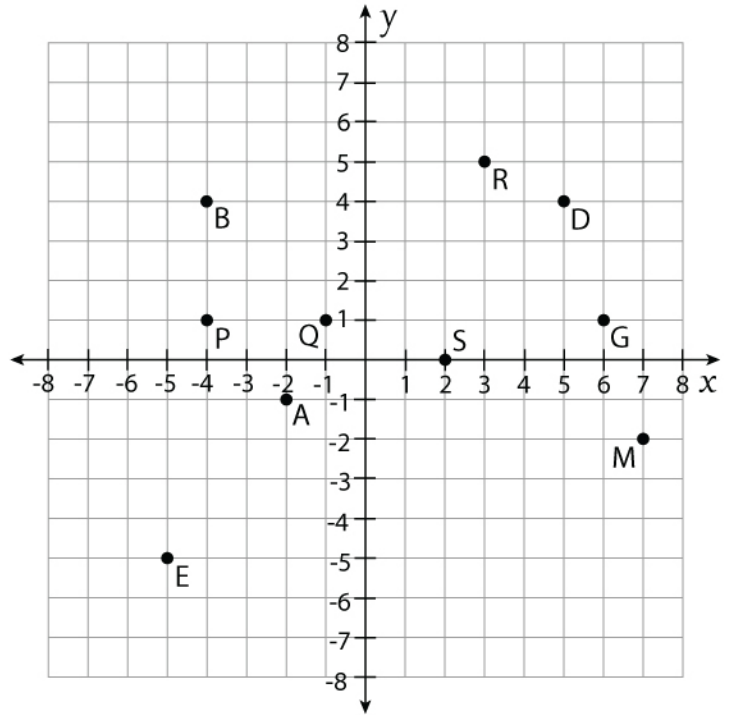
a) $(-1, 1) =$ _____ b) $(7, -2) =$ _____

c) $(-4, 4) =$ _____ d) $(5, 4) =$ _____

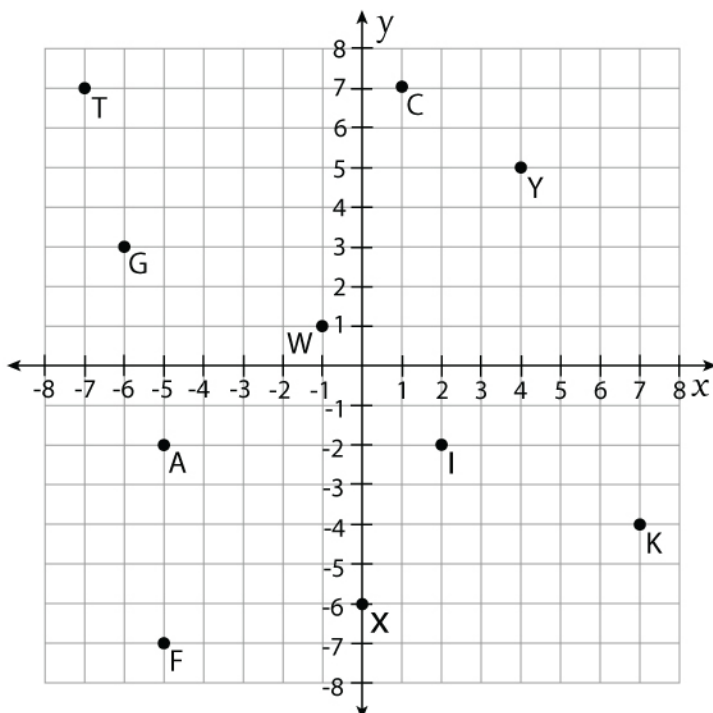
e) $(3, 5) =$ _____ f) $(-4, 1) =$ _____

g) $(-5, -5) =$ _____ h) $(6, 1) =$ _____

i) $(-2, -1) =$ _____ j) $(2, 0) =$ _____



2) Write the ordered pair corresponding to each letter on the grid.



a) $Y =$ _____ b) $A =$ _____

c) $G =$ _____ d) $I =$ _____

e) $F =$ _____ f) $K =$ _____

g) $T =$ _____ h) $C =$ _____

i) $W =$ _____ j) $X =$ _____

Name:

Score: Date:

Coordinate Plane

Answers

1) Write the letter corresponding to each coordinate point on the grid.

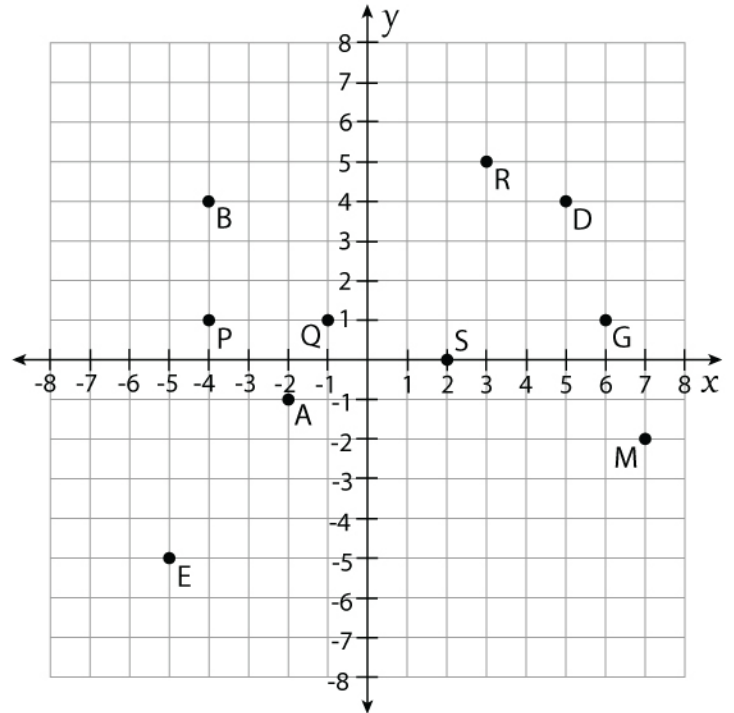
a) $(-1, 1) = \underline{Q}$ b) $(7, -2) = \underline{M}$

c) $(-4, 4) = \underline{B}$ d) $(5, 4) = \underline{D}$

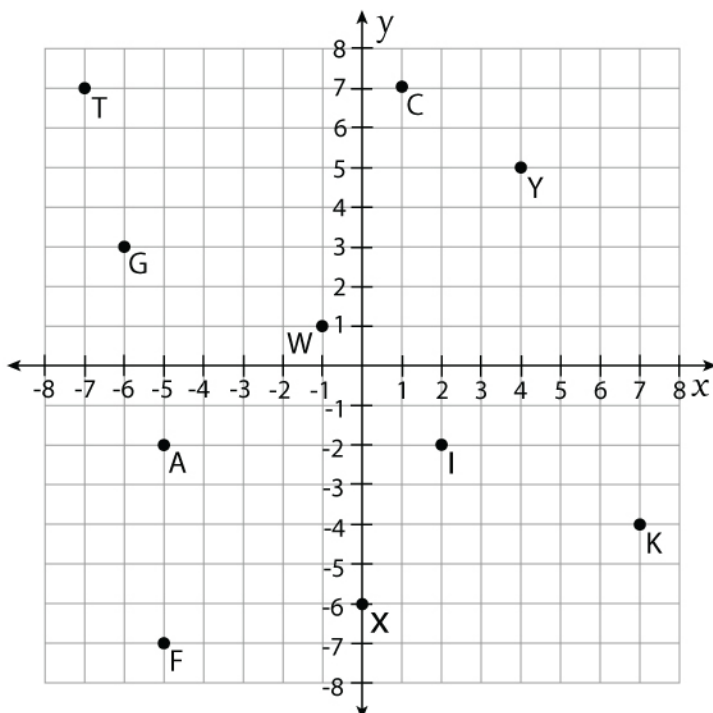
e) $(3, 5) = \underline{R}$ f) $(-4, 1) = \underline{P}$

g) $(-5, -5) = \underline{E}$ h) $(6, 1) = \underline{G}$

i) $(-2, -1) = \underline{A}$ j) $(2, 0) = \underline{S}$



2) Write the ordered pair corresponding to each letter on the grid.



a) $Y = \underline{(4, 5)}$ b) $A = \underline{(-5, 2)}$

c) $G = \underline{(-6, 3)}$ d) $I = \underline{(2, -2)}$

e) $F = \underline{(-5, -7)}$ f) $K = \underline{(7, -4)}$

g) $T = \underline{(-7, 7)}$ h) $C = \underline{(1, 7)}$

i) $W = \underline{(-1, 1)}$ j) $X = \underline{(0, -6)}$