

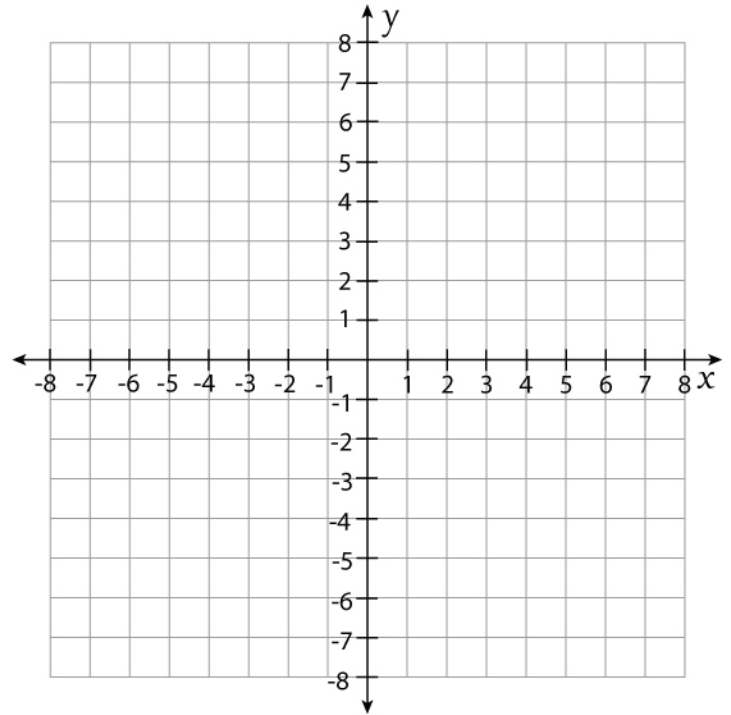
Name:

Score: Date:






Coordinate Plane Worksheet

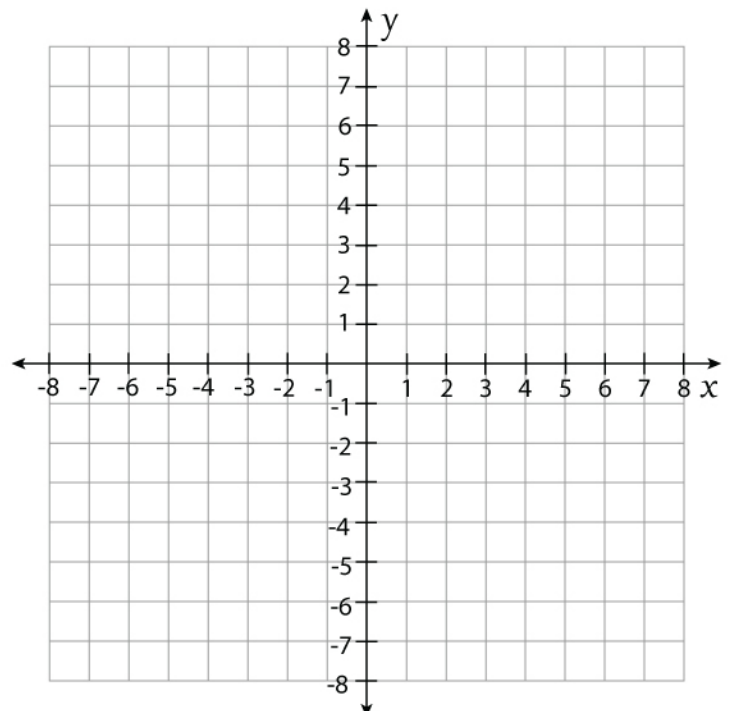
1) Plot each point on the grid provided

- a) B(2, 4)
- b) X (3, 3)
- c) E(4, -1)
- d) P(-5, 4)
- e) S(-5, 2)
- f) T(0, 5)
- g) Q(-3, -4)
- h) L(2, 1)
- i) R(2, -4)
- j) C(3, 5)



2) Draw the given shapes on the grid provided.

- a)  at (5, 4)
- b)  at (2, -2)
- c)  at (-3, 2)
- d)  at (-5, -1)
- e)  at (6, -4)



Name:

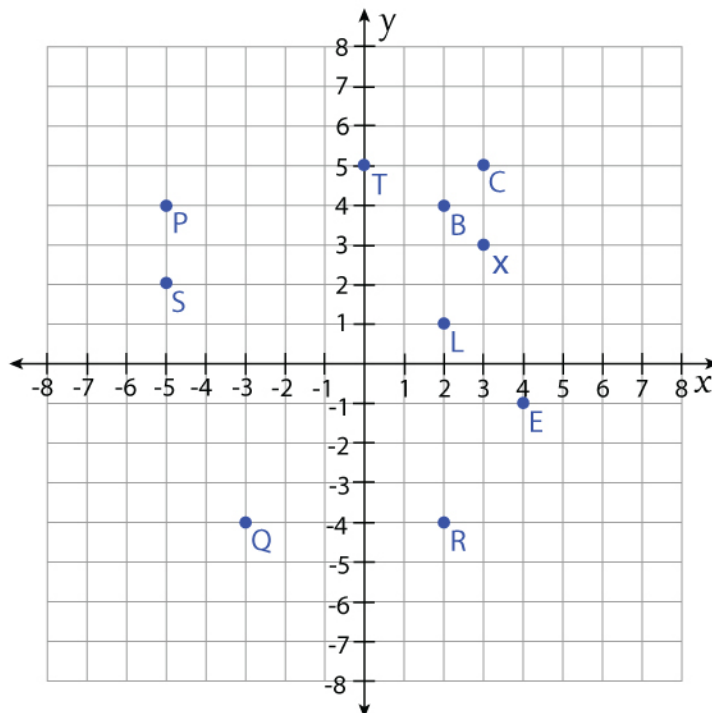
Score: Date:

Coordinate Plane Worksheet

Answers

1) Plot each point on the grid provided

- a) B(2, 4)
- b) X (3, 3)
- c) E(4, -1)
- d) P(-5, 4)
- e) S(-5, 2)
- f) T(0, 5)
- g) Q(-3, -4)
- h) L(2, 1)
- i) R(2, -4)
- j) C(3, 5)



2) Draw the given shapes on the grid provided.

- a) ☆ at (5, 4)
- b) △ at (2, -2)
- c) □ at (-3, 2)
- d) ▭ at (-5, -1)
- e) ○ at (6, -4)

