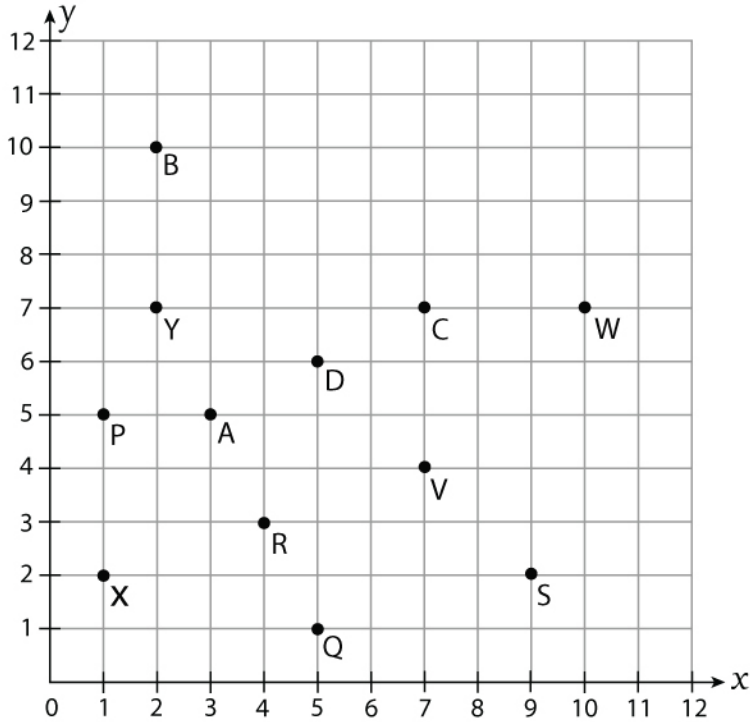


# Graphing Points on a Coordinate Plane

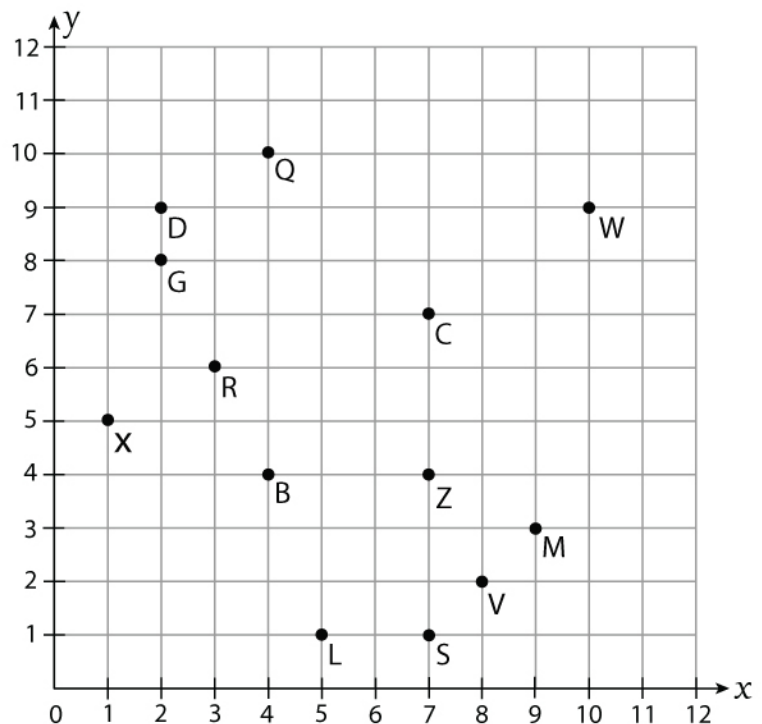
A) Write the ordered pair for the points marked in the grid.



- |              |               |
|--------------|---------------|
| 1) B = _____ | 7) X = _____  |
| 2) R = _____ | 8) A = _____  |
| 3) V = _____ | 9) P = _____  |
| 4) D = _____ | 10) Y = _____ |
| 5) S = _____ | 11) Q = _____ |
| 6) W = _____ | 12) S = _____ |

B) Write the letter that corresponds to each ordered pair.

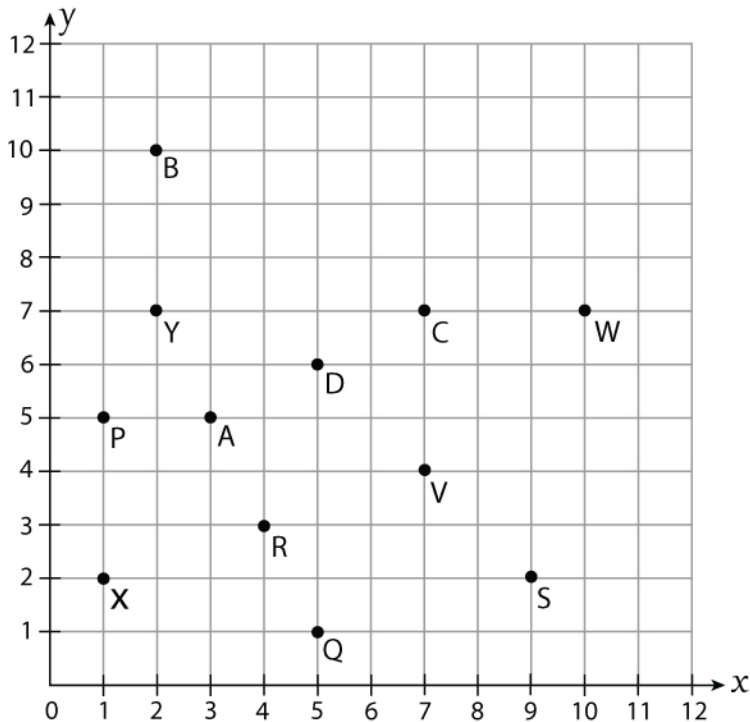
- |                  |                  |
|------------------|------------------|
| a) (5, 1) _____  | g) (10, 9) _____ |
| b) (3, 6) _____  | h) (4, 4) _____  |
| c) (4, 10) _____ | i) (2, 8) _____  |
| d) (7, 1) _____  | j) (7, 4) _____  |
| e) (9, 3) _____  | k) (1, 5) _____  |
| f) (8, 2) _____  | l) (2, 9) _____  |



# Graphing Points on a Coordinate Plane

## Answers

A) Write the ordered pair for the points marked in the grid.



1) B = (2, 10)

7) X = (1, 2)

2) R = (4, 3)

8) A = (3, 5)

3) V = (7, 4)

9) P = (1, 5)

4) D = (5, 6)

10) Y = (2, 7)

5) S = (9, 2)

11) Q = (5, 1)

6) W = (10, 7)

12) S = (9, 2)

B) Write the letter that corresponds to each ordered pair.

a) (5, 1) L

g) (10, 9) W

b) (3, 6) R

h) (4, 4) B

c) (4, 10) Q

i) (2, 8) G

d) (7, 1) S

j) (7, 4) Z

e) (9, 3) M

k) (1, 5) X

f) (8, 2) V

l) (2, 9) D

