

Number Line

Adding and Subtracting Fractions

A. Complete the addition sentences using the number lines.

1 $\frac{2}{6} + \frac{3}{6} = \square$

2 $\frac{4}{11} + \frac{5}{11} = \square$

3 $\frac{3}{4} + \frac{1}{4} = \square$

B. Complete the subtraction sentences using the number lines.

1 $\frac{7}{10} - \frac{3}{10} = \square$

2 $\frac{6}{7} - \frac{4}{7} = \square$

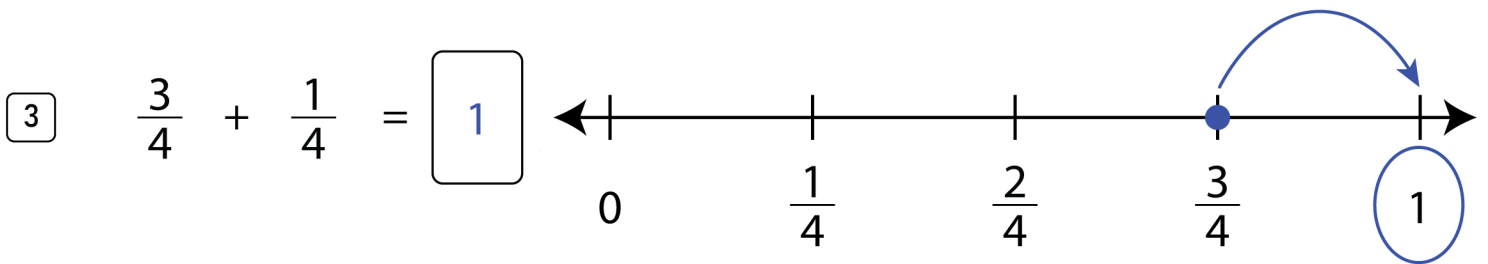
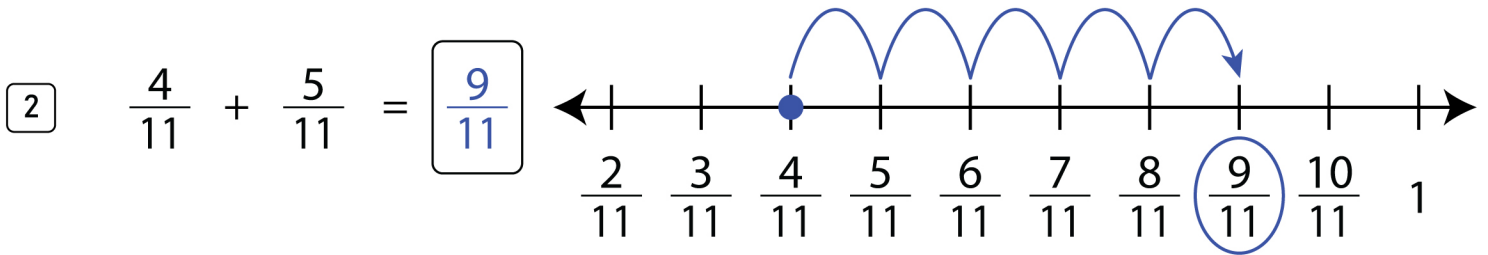
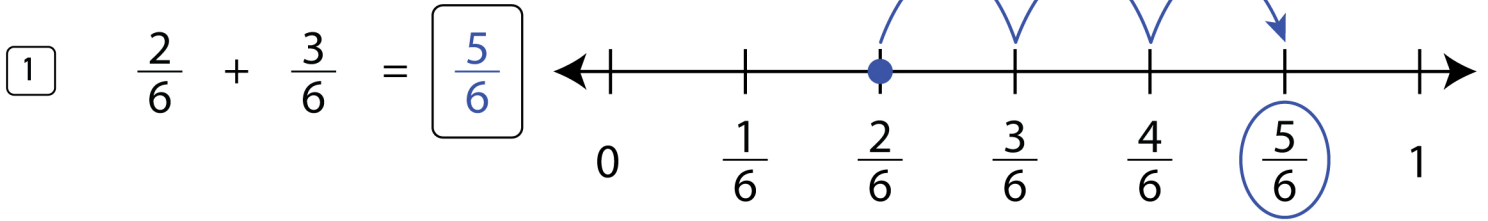
3 $\frac{4}{5} - \frac{2}{5} = \square$

Number Line

Adding and Subtracting Fractions

A.

Answers



B.

