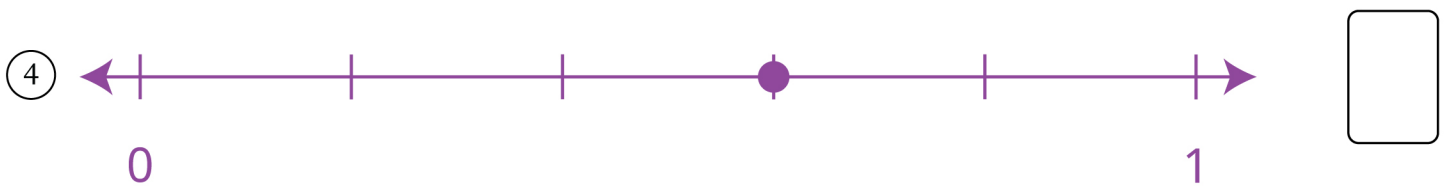
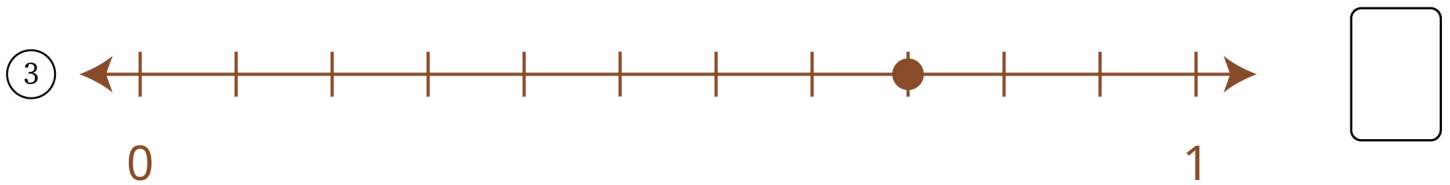


# Finding Fractions on a Number Line

A. Identify the fraction marked on each number line and write in the box.



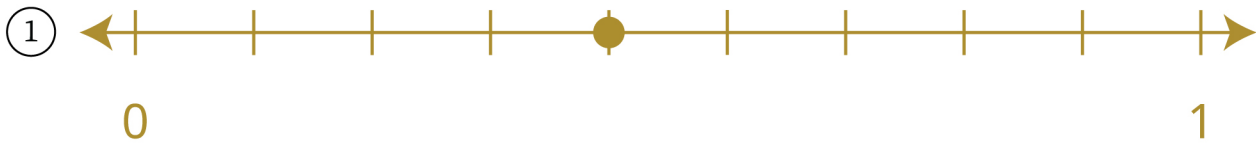
B. Mark the given fraction by drawing a point on the number line.



# Finding Fractions on a Number Line

## Answers

A.



$$\frac{4}{9}$$



$$\frac{1}{6}$$



$$\frac{8}{11}$$



$$\frac{3}{5}$$

B.

