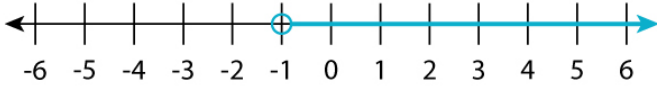


Name : _____

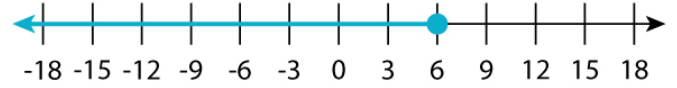
Score : _____ Date : _____

Number Line Writing Inequalities

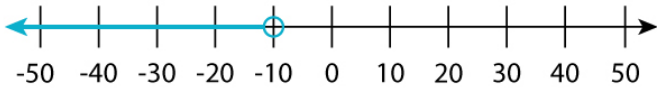
Write the inequalities using the given number lines.



Inequality: _____



Inequality: _____



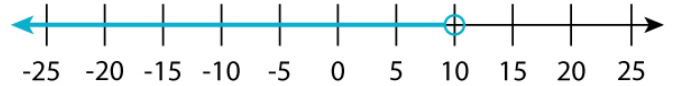
Inequality: _____



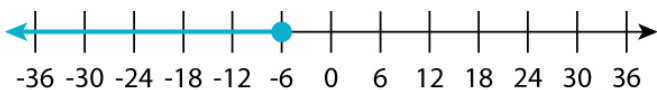
Inequality: _____



Inequality: _____



Inequality: _____



Inequality: _____



Inequality: _____



Inequality: _____



Inequality: _____

Name : _____

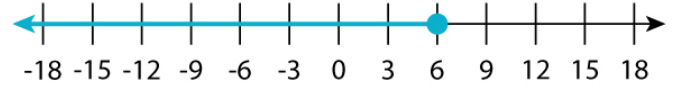
Score : _____ Date : _____

Number Line Writing Inequalities

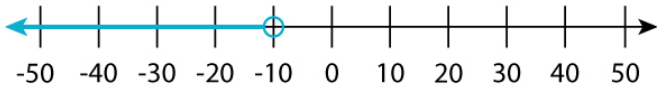
Answers



Inequality: $x > -1$



Inequality: $x \leq 6$



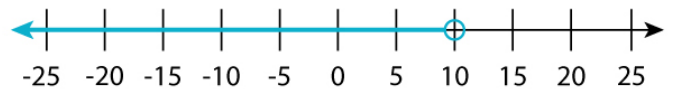
Inequality: $x < -10$



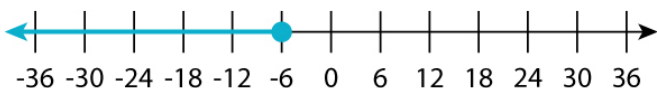
Inequality: $x \geq -8$



Inequality: $x \geq 2$



Inequality: $x < 10$



Inequality: $x \leq -6$



Inequality: $x > -7$



Inequality: $x < 9$



Inequality: $x \geq -14$