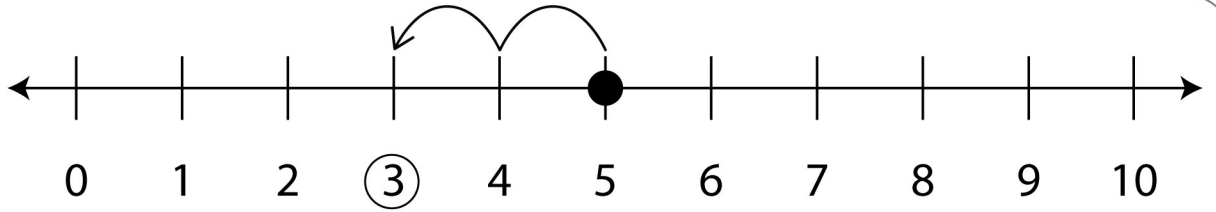


Number Line Subtraction

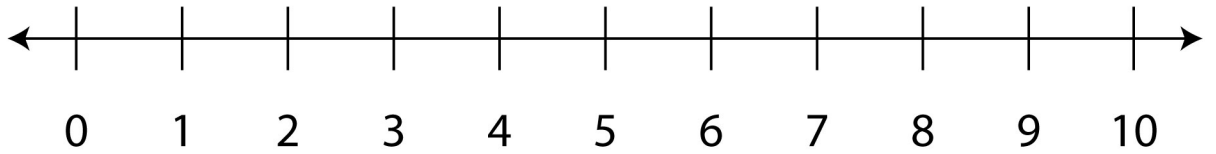
Find the difference using the given number line.

Example

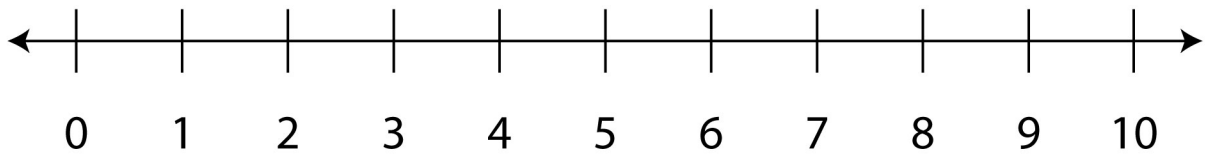
$$\begin{array}{r} 5 \\ - 2 \\ \hline 3 \end{array}$$



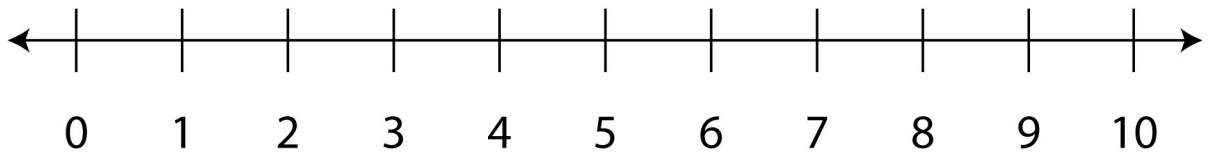
$$\begin{array}{r} 8 \\ - 6 \\ \hline \end{array}$$



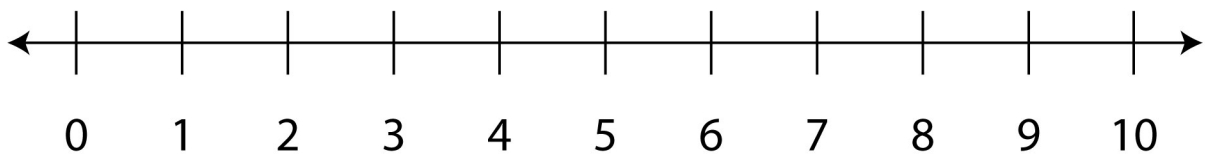
$$\begin{array}{r} 4 \\ - 3 \\ \hline \end{array}$$



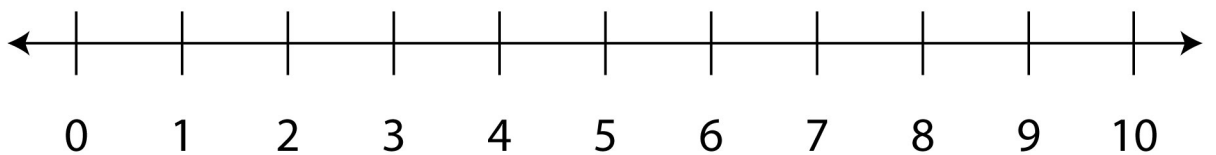
$$\begin{array}{r} 9 \\ - 5 \\ \hline \end{array}$$



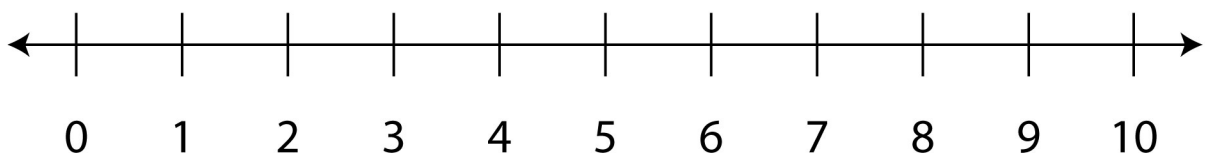
$$\begin{array}{r} 10 \\ - 4 \\ \hline \end{array}$$



$$\begin{array}{r} 3 \\ - 1 \\ \hline \end{array}$$



$$\begin{array}{r} 7 \\ - 4 \\ \hline \end{array}$$

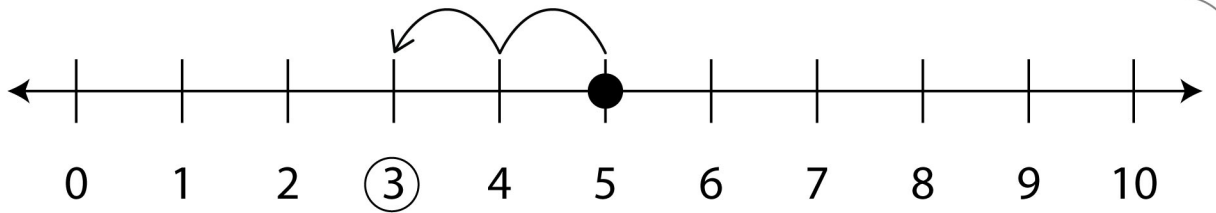


Number Line Subtraction

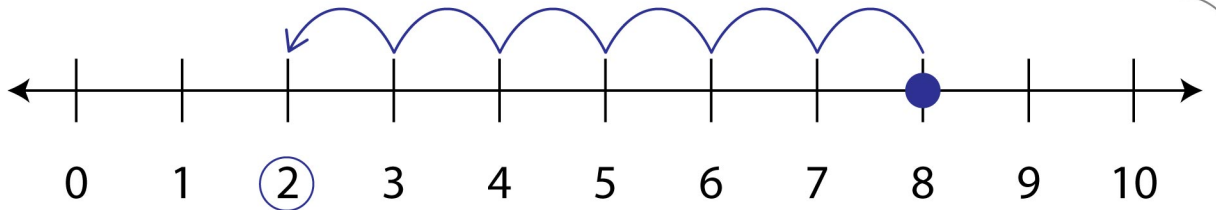
Answers

Example

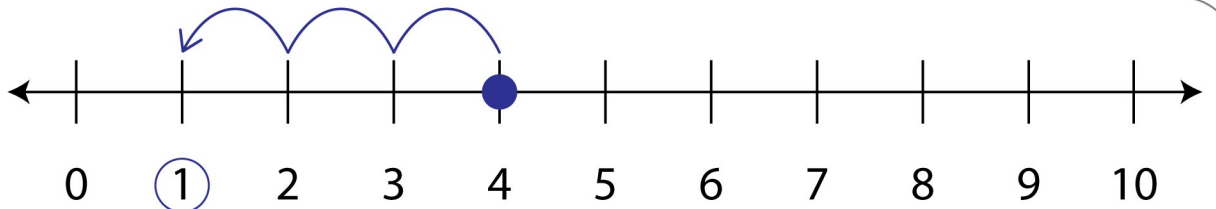
$$\begin{array}{r} 5 \\ - 2 \\ \hline 3 \end{array}$$



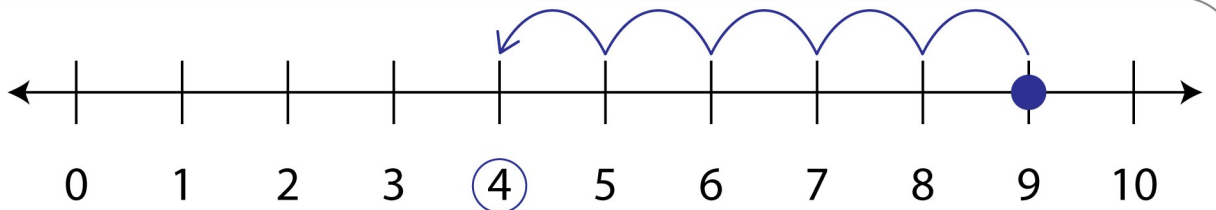
$$\begin{array}{r} 8 \\ - 6 \\ \hline 2 \end{array}$$



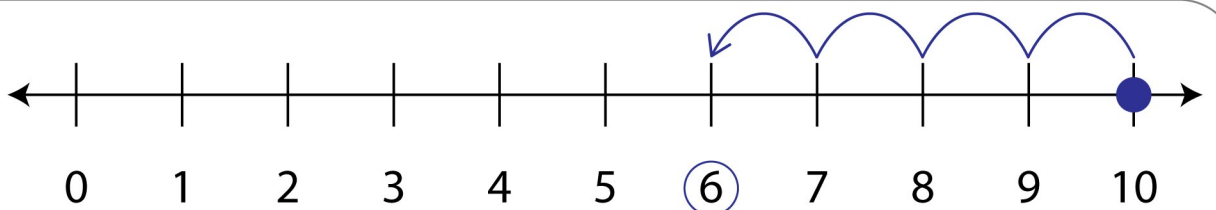
$$\begin{array}{r} 4 \\ - 3 \\ \hline 1 \end{array}$$



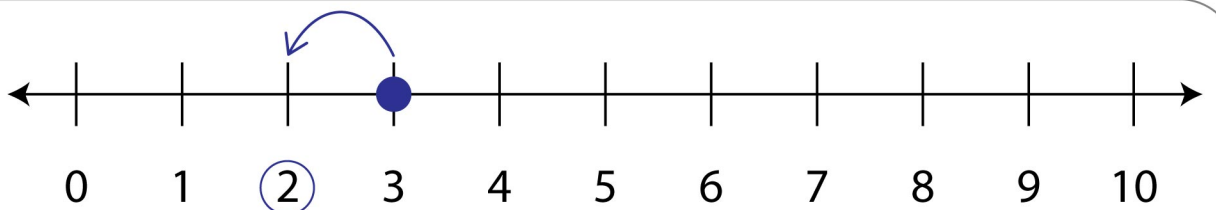
$$\begin{array}{r} 9 \\ - 5 \\ \hline 4 \end{array}$$



$$\begin{array}{r} 10 \\ - 4 \\ \hline 6 \end{array}$$



$$\begin{array}{r} 3 \\ - 1 \\ \hline 2 \end{array}$$



$$\begin{array}{r} 7 \\ - 4 \\ \hline 3 \end{array}$$

