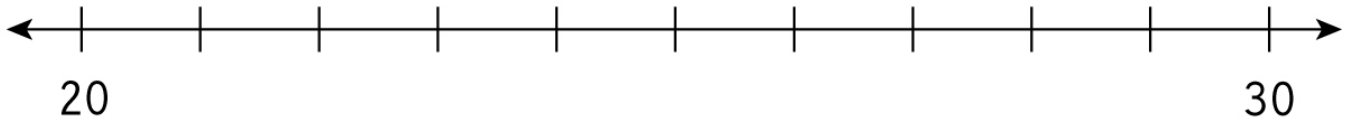


Rounding with Number Lines

Represent the following numbers on the given number line and round them to the nearest 10.

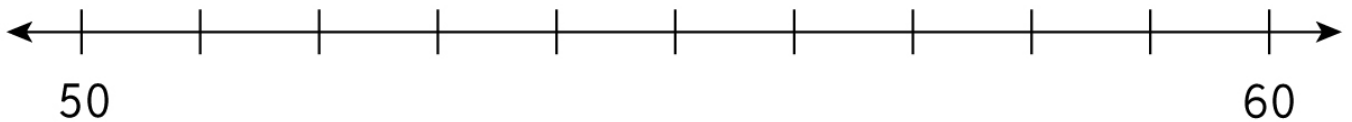
1. i) 28 ii) 23



28 to the nearest 10 is

23 to the nearest 10 is

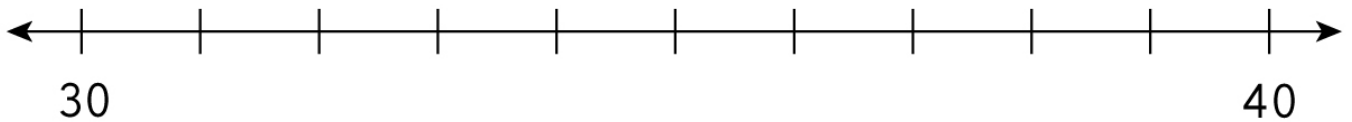
2. i) 51 ii) 55



51 to the nearest 10 is

55 to the nearest 10 is

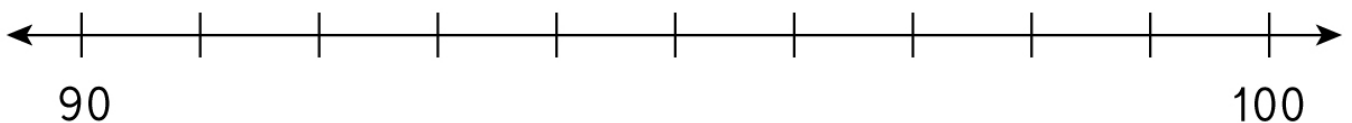
3. i) 36 ii) 34



34 to the nearest 10 is

36 to the nearest 10 is

4. i) 97 ii) 92



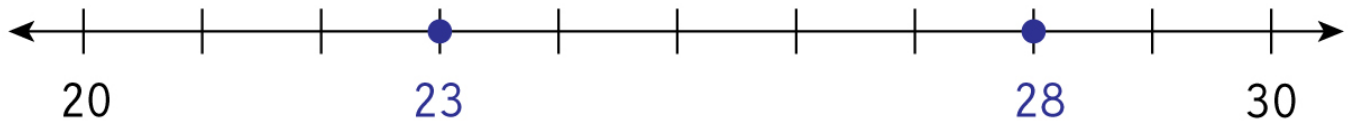
97 to the nearest 10 is

92 to the nearest 10 is

Rounding with Number Lines

Answers

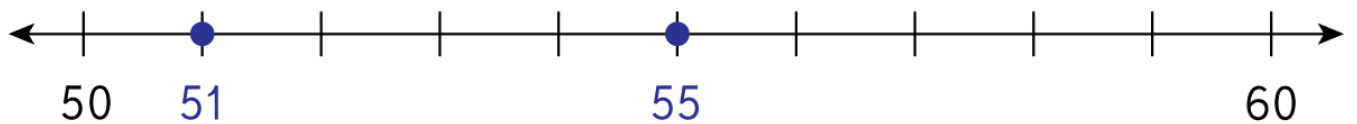
1. i) 28 ii) 23



28 to the nearest 10 is

23 to the nearest 10 is

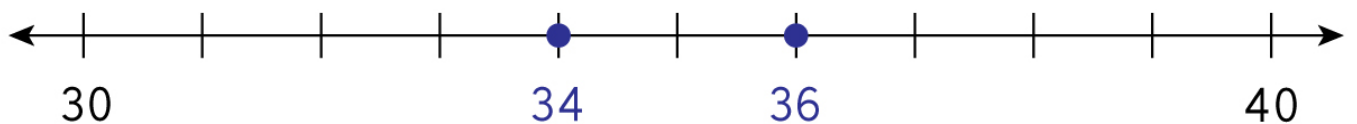
2. i) 51 ii) 55



51 to the nearest 10 is

55 to the nearest 10 is

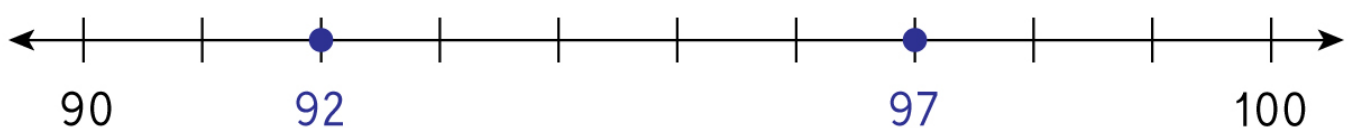
3. i) 36 ii) 34



34 to the nearest 10 is

36 to the nearest 10 is

4. i) 97 ii) 92



97 to the nearest 10 is

92 to the nearest 10 is