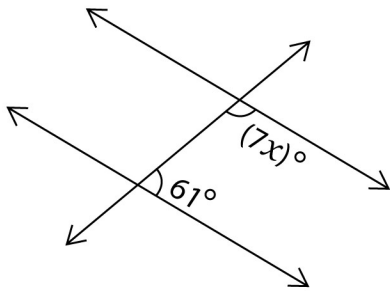


# Transversal Angles Practice Sheet

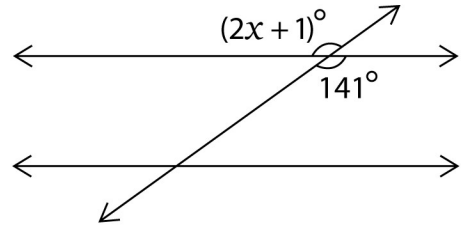
Solve for  $x$

1)



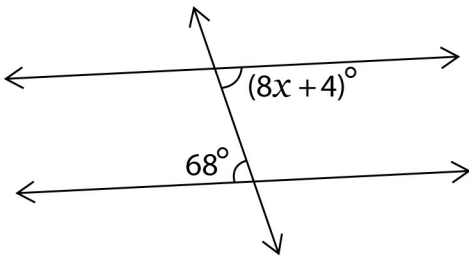
$x =$  \_\_\_\_\_

2)



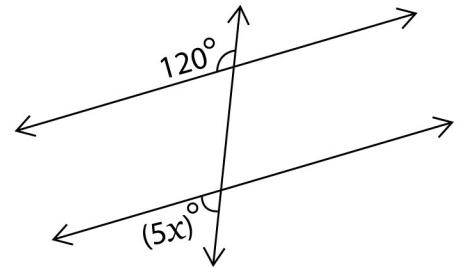
$x =$  \_\_\_\_\_

3)



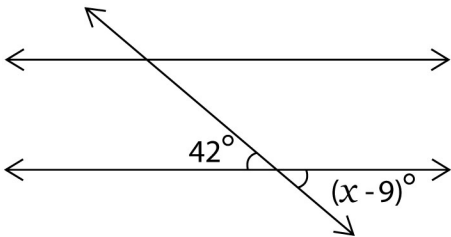
$x =$  \_\_\_\_\_

4)



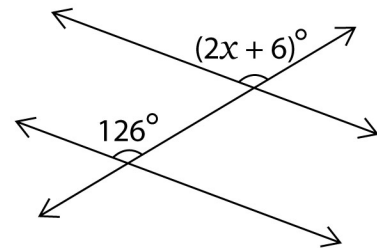
$x =$  \_\_\_\_\_

5)



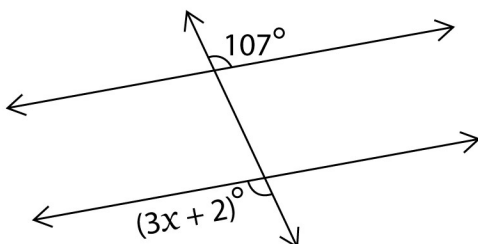
$x =$  \_\_\_\_\_

6)



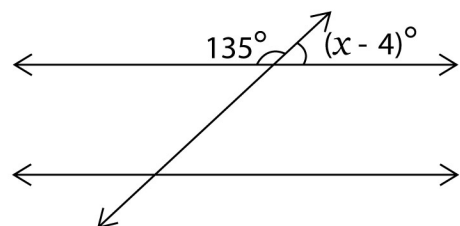
$x =$  \_\_\_\_\_

7)



$x =$  \_\_\_\_\_

8)

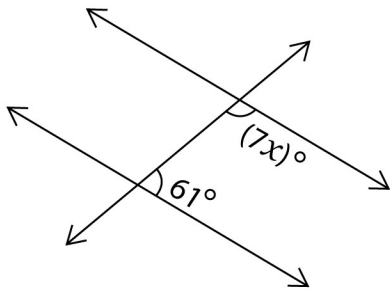


$x =$  \_\_\_\_\_

# Transversal Angles Practice Sheet

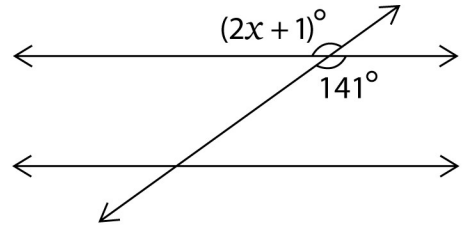
## Answers

1)



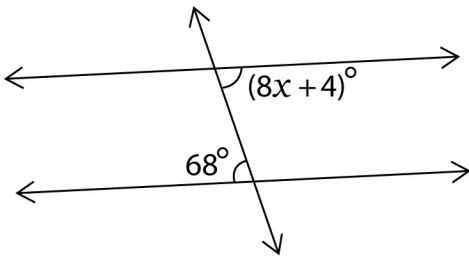
$$x = \underline{17^\circ}$$

2)



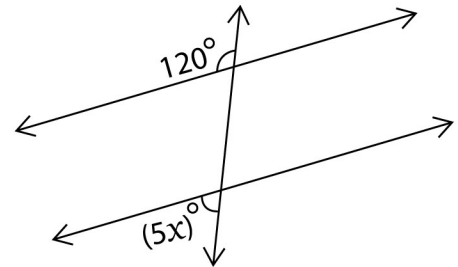
$$x = \underline{70^\circ}$$

3)



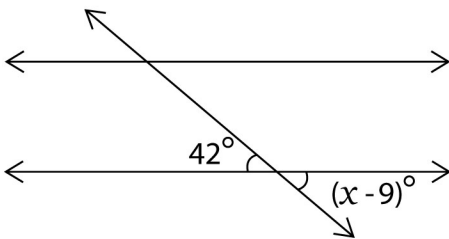
$$x = \underline{8^\circ}$$

4)



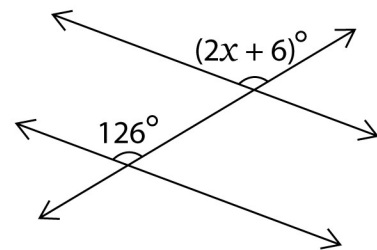
$$x = \underline{12^\circ}$$

5)



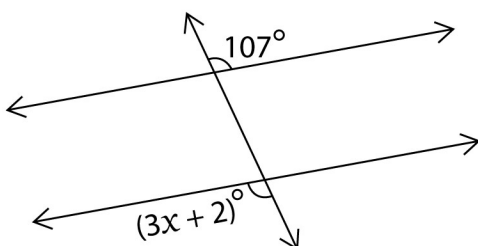
$$x = \underline{51^\circ}$$

6)



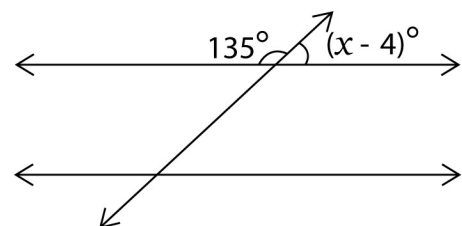
$$x = \underline{60^\circ}$$

7)



$$x = \underline{35^\circ}$$

8)



$$x = \underline{49^\circ}$$