


# Subtract on an Empty Number Line

Use the empty number line and subtract.


1.  $15 - 12$

= \_\_\_\_\_




2.  $17 - 11$

= \_\_\_\_\_




3.  $15 - 13$

= \_\_\_\_\_




4.  $18 - 12$

= \_\_\_\_\_




5.  $20 - 14$

= \_\_\_\_\_



6.  $16 - 13$

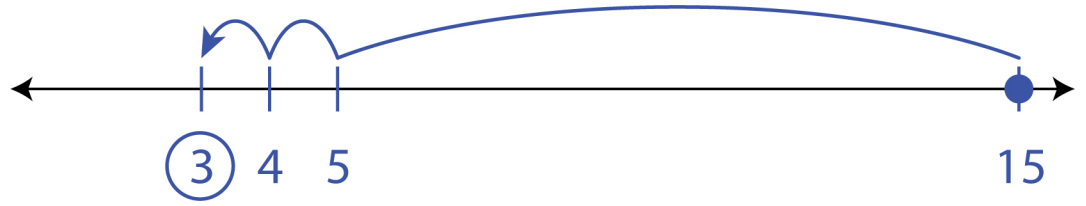
= \_\_\_\_\_



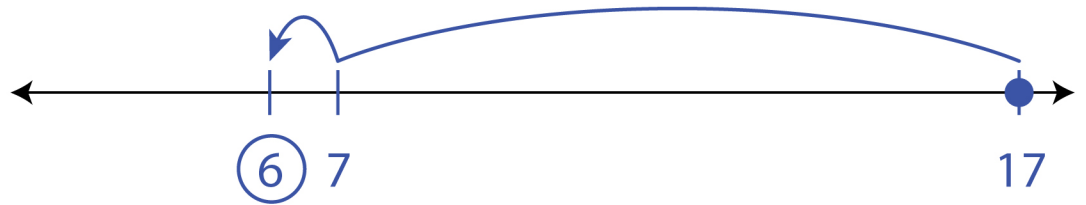
# Subtract on an Empty Number Line

Answers

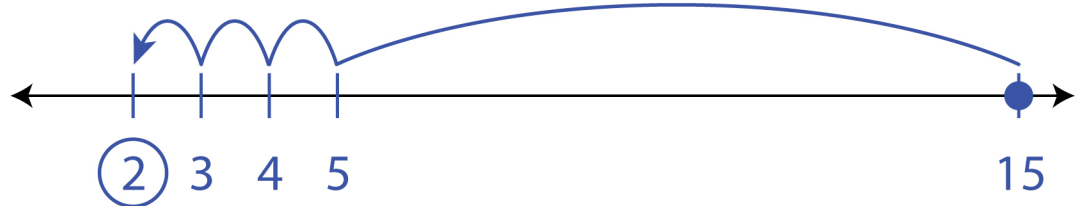
1.  $15 - 12$   
 $= \underline{3}$




2.  $17 - 11$   
 $= \underline{6}$




3.  $15 - 13$   
 $= \underline{2}$



4.  $18 - 12$   
 $= \underline{6}$



5.  $20 - 14$   
 $= \underline{6}$



6.  $16 - 13$   
 $= \underline{3}$

