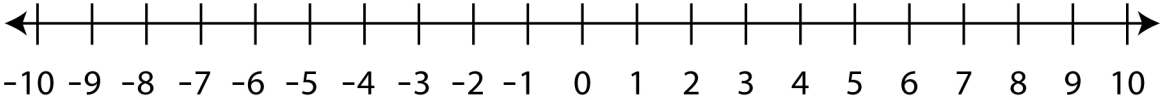
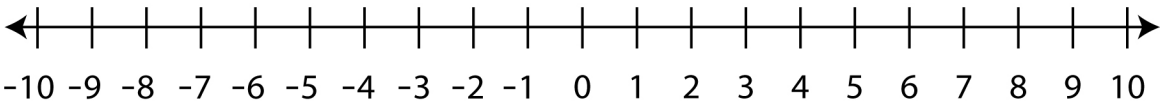
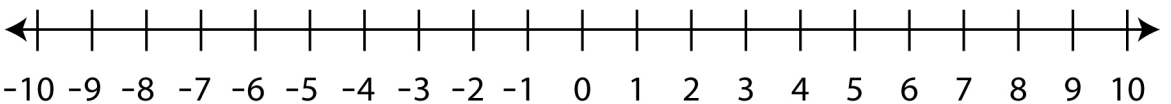


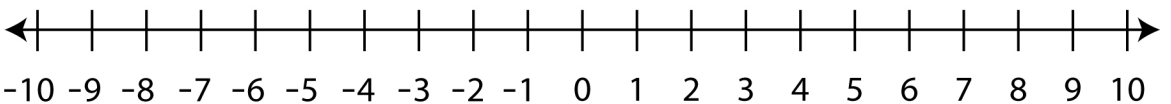
# Subtracting Integers on a Number Line

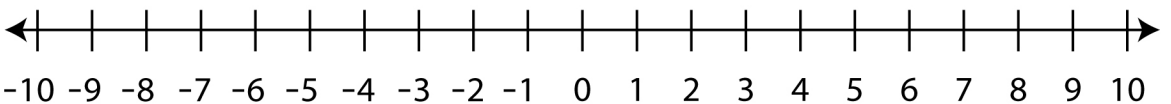
Find the difference using the number line.

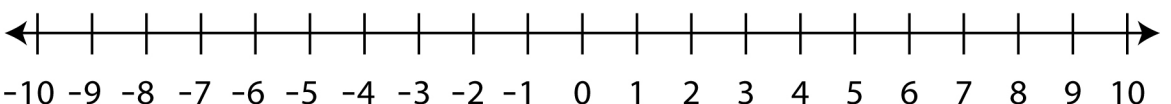
$(-2) - (-7) = \underline{\quad}$  

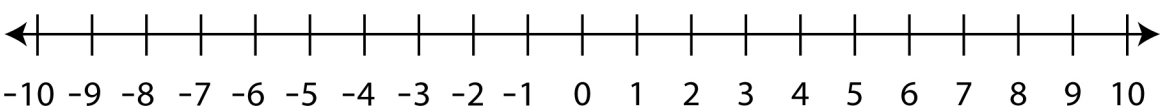
$(-1) - (-2) = \underline{\quad}$  

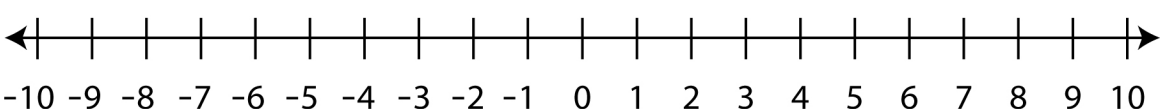
$6 - 8 = \underline{\quad}$  

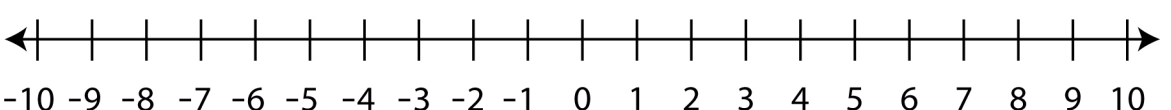
$8 - 11 = \underline{\quad}$  

$(-3) - (-6) = \underline{\quad}$  

$9 - 4 = \underline{\quad}$  

$10 - 17 = \underline{\quad}$  

$4 - 12 = \underline{\quad}$  

$7 - 14 = \underline{\quad}$  

# Subtracting Integers on a Number Line

## Answers

