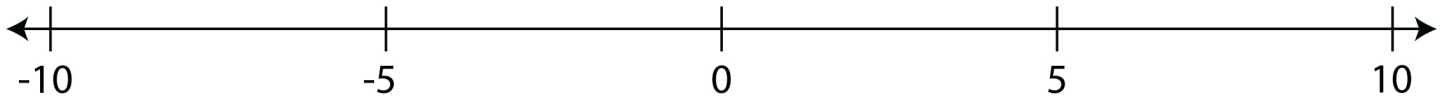


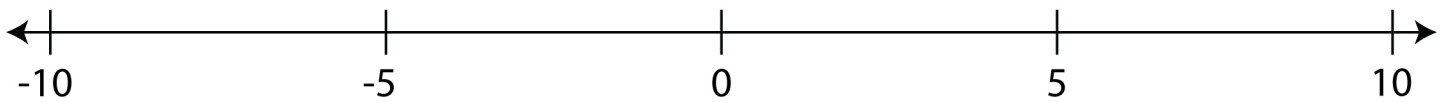
# Number Line Integers

A. Locate the following integers on the given number line.

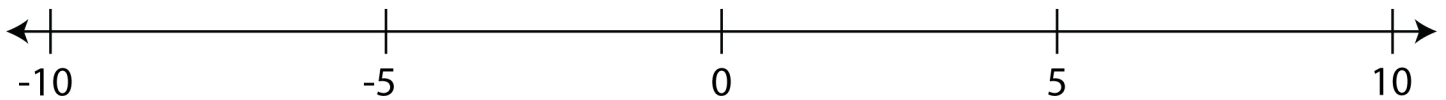
- 1 i) 5, ii) -1, iii) -7, iv) 9, v) 6



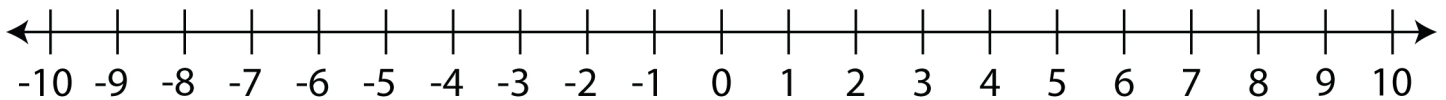
- 2 i) -4, ii) 2, iii) 10, iv) -3, v) -9



- 3 i) -8, ii) 1, iii) 4, iv) -5, v) 7



B. Observe the number line and answer the questions below.



1) What integer is 2 units to the left of 9?

2) What integer is 4 units to the right of -7?

3) What integer is 11 units to the right of -2?

4) What integer is 5 units to the left of -1?

5) What integer is 8 units to the right of 0?

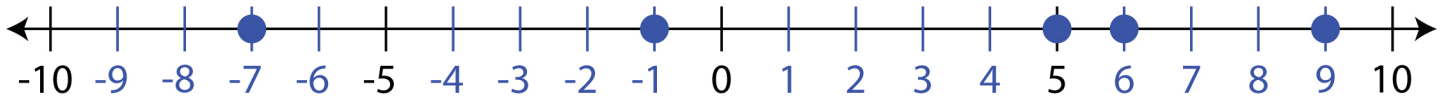
6) What integer is 15 units to the left of 10?

# Number Line

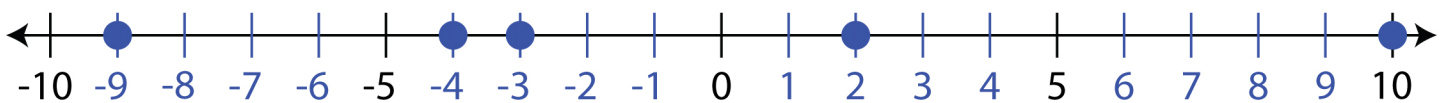
## Integers

A. Answers

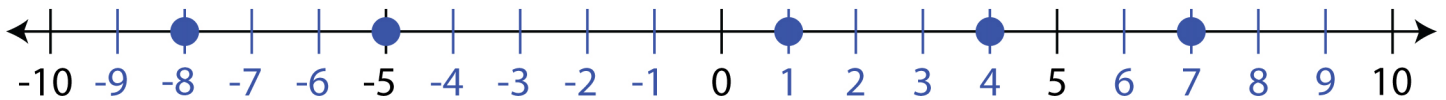
1 i) 5, ii) -1, iii) -7, iv) 9, v) 6



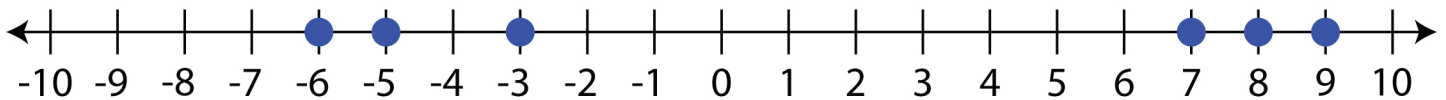
2 i) -4, ii) 2, iii) 10, iv) -3, v) -9



3 i) -8, ii) 1, iii) 4, iv) -5, v) 7



B.



1) What integer is 2 units to the left of 9?

7

2) What integer is 4 units to the right of -7?

-3

3) What integer is 11 units to the right of -2?

9

4) What integer is 5 units to the left of -1?

-6

5) What integer is 8 units to the right of 0?

8

6) What integer is 15 units to the left of 10?

-5