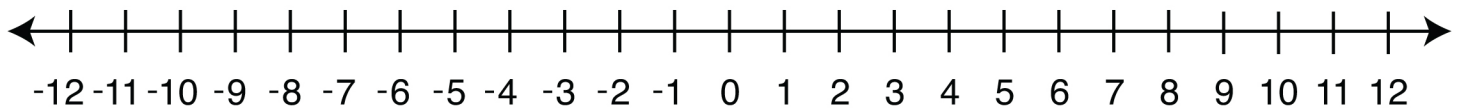


Name: .....

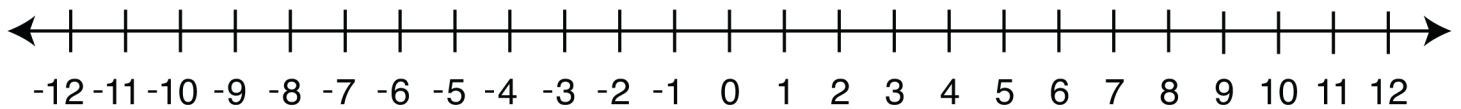
## Integers on a Number Line

A. Mark the given integers on the number line.

10	-8	2	-5
11	12	-7	-1
-3	-11	-12	6



B. Answer the following questions using the number line below.



1) 4 units to the right of -2 is \_\_\_\_\_      6) 6 units to the right of -1 is \_\_\_\_\_

2) 7 units to the left of 3 is \_\_\_\_\_      7) 10 units to the left of 7 is \_\_\_\_\_

3) 2 units to the left of 6 is \_\_\_\_\_      8) 3 units to the right of 8 is \_\_\_\_\_

4) 11 units to the right of -4 is \_\_\_\_\_      9) 9 units to the right of -6 is \_\_\_\_\_

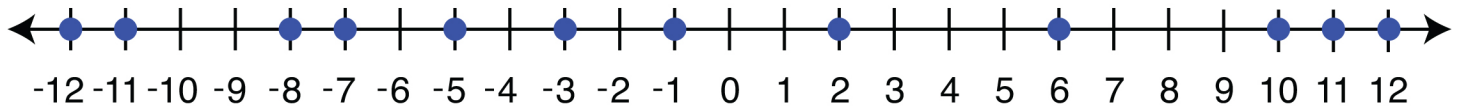
5) 1 unit to the left of 9 is \_\_\_\_\_      10) 5 units to the left of 4 is \_\_\_\_\_

## Integers on a Number Line

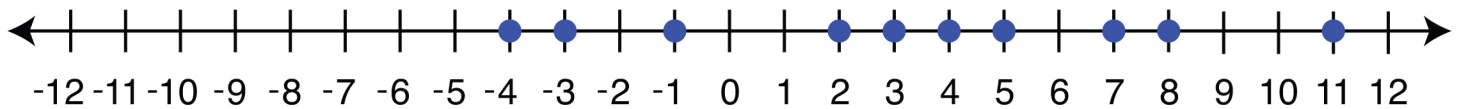
A.

### Answers

10	-8	2	-5
11	12	-7	-1
-3	-11	-12	6



B.

1) 4 units to the right of -2 is 26) 6 units to the right of -1 is 52) 7 units to the left of 3 is -47) 10 units to the left of 7 is -33) 2 units to the left of 6 is 48) 3 units to the right of 8 is 114) 11 units to the right of -4 is 79) 9 units to the right of -6 is 35) 1 unit to the left of 9 is 810) 5 units to the left of 4 is -1