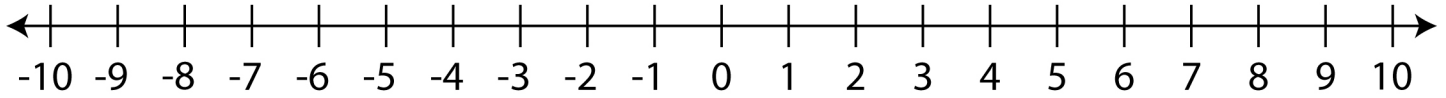


# Ordering Integers on a Number Line

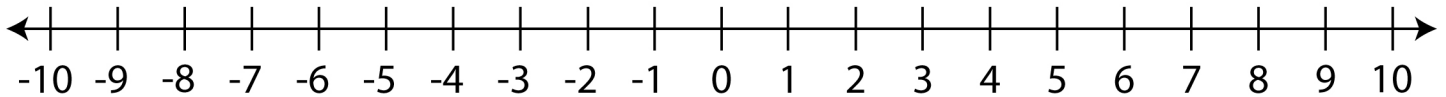
A. Mark the integers on the number line and write them in ascending order.

① -3, 8, -6, 0



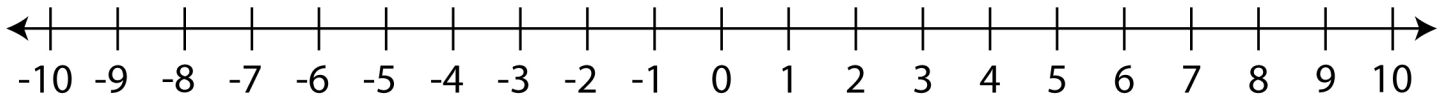
\_\_\_\_\_

② 4, -7, -1, 2



\_\_\_\_\_

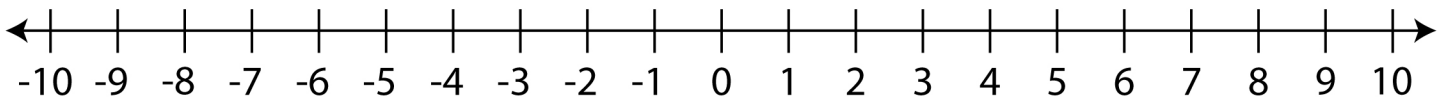
③ 10, -5, 1, -8



\_\_\_\_\_

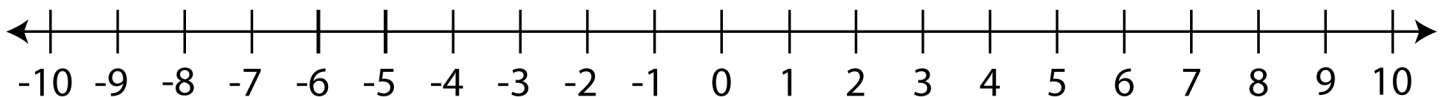
B. Mark the integers on the number line and write them in descending order.

① -2, 9, 3, -4



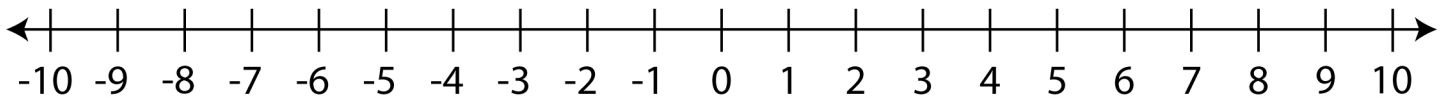
\_\_\_\_\_

② 7, -9, 5, -10



\_\_\_\_\_

③ -3, 6, -5, 4



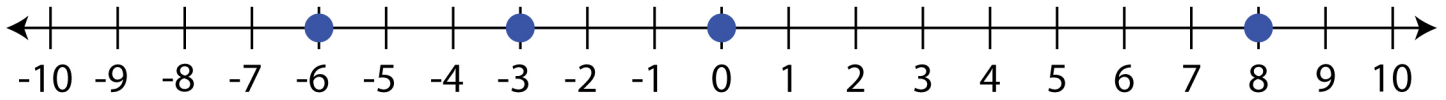
\_\_\_\_\_

# Ordering Integers on a Number Line

A.

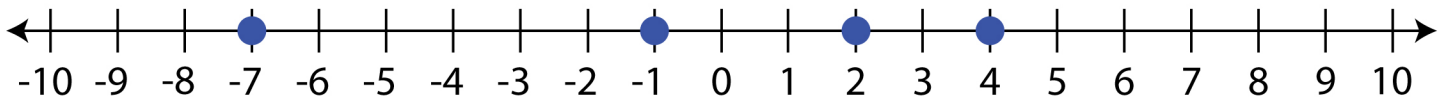
Answers

①  $-3, 8, -6, 0$



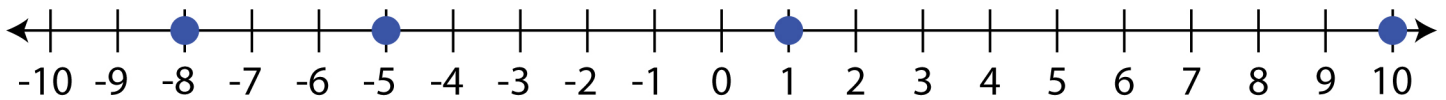
$-6, -3, 0, 8$

②  $4, -7, -1, 2$



$-7, -1, 2, 4$

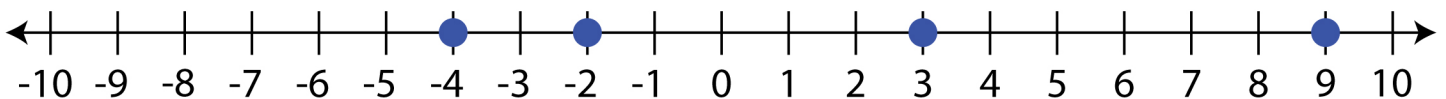
③  $10, -5, 1, -8$



$-8, -5, 1, 10$

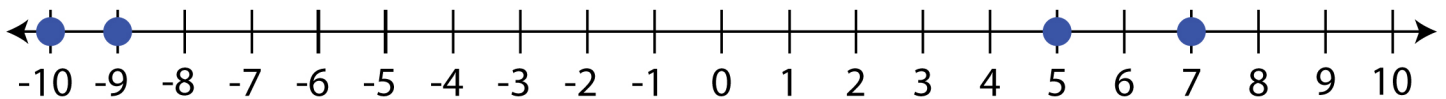
B.

①  $-2, 9, 3, -4$



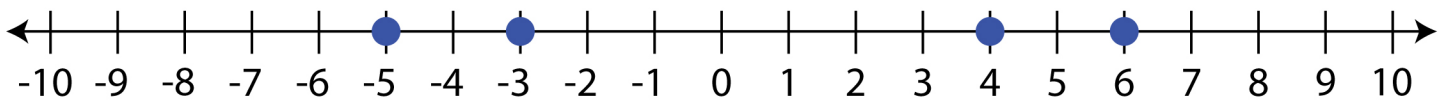
$9, 3, -2, -4$

②  $7, -9, 5, -10$



$7, 5, -9, -10$

③  $-3, 6, -5, 4$



$6, 4, -3, -5$