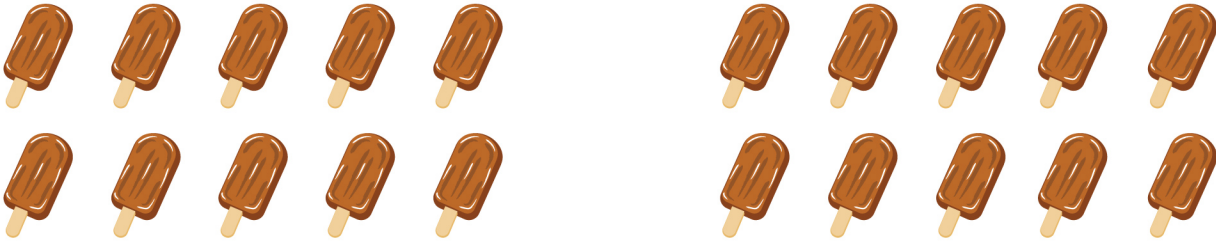


Divide Using the Pictures


Divide using the pictures in each question.

1. How many ice creams in each group?



$$\underline{\quad} \div \underline{\quad} = \underline{\quad}$$

2. How many balloons in each group?




$$\underline{\quad} \div \underline{\quad} = \underline{\quad}$$

3. How many sunflowers in each group?



$$\underline{\quad} \div \underline{\quad} = \underline{\quad}$$

4. How many candies in each group?



$$\underline{\quad} \div \underline{\quad} = \underline{\quad}$$

5. How many footballs in each group?




$$\underline{\quad} \div \underline{\quad} = \underline{\quad}$$

Divide Using the Pictures


Answers

1.




$$\underline{20} \div \underline{2} = \underline{10}$$

2.




$$\underline{15} \div \underline{3} = \underline{5}$$

3.



$$\underline{16} \div \underline{2} = \underline{8}$$

4.



$$\underline{20} \div \underline{5} = \underline{4}$$

5.



$$\underline{9} \div \underline{3} = \underline{3}$$