



Division Using Pictures

1. Divide 10 balls into groups of 2. How many balls in each group?




Division sentence: $10 \div 2 =$ _____

2. Divide 8 watermelons into groups of 4. How many watermelons in each group?



Division sentence: $8 \div 4 =$ _____

3. Divide 14 oranges into groups of 7. How many oranges in each group?




Division sentence: $14 \div 7 =$ _____

4. Divide 12 cupcakes into groups of 4. How many cupcakes in each group?



Division sentence: $12 \div 4 =$ _____

5. Divide 18 strawberries into groups of 3. How many strawberries in each group?




Division sentence: $18 \div 3 =$ _____

Division Using Pictures


1.

Answers




Division sentence: $10 \div 2 = \underline{5}$

2.



Division sentence: $8 \div 4 = \underline{2}$

3.




Division sentence: $14 \div 7 = \underline{2}$

4.



Division sentence: $12 \div 4 = \underline{3}$

5.



Division sentence: $18 \div 3 = \underline{6}$