



# Division for Sharing

Share each set of fruits among the number of people shown. How many fruits will each person get?




Share among 2

$$\underline{\quad} \div \underline{\quad} = \underline{\quad}$$




Share among 3

$$\underline{\quad} \div \underline{\quad} = \underline{\quad}$$




Share among 3

$$\underline{\quad} \div \underline{\quad} = \underline{\quad}$$



Share among 5

$$\underline{\quad} \div \underline{\quad} = \underline{\quad}$$




Share among 2

$$\underline{\quad} \div \underline{\quad} = \underline{\quad}$$


# Division for Sharing

Answers




Share among 2

$$\underline{8} \div \underline{2} = \underline{4}$$




Share among 3

$$\underline{12} \div \underline{3} = \underline{4}$$




Share among 3

$$\underline{9} \div \underline{3} = \underline{3}$$



Share among 5

$$\underline{10} \div \underline{5} = \underline{2}$$



Share among 2

$$\underline{6} \div \underline{2} = \underline{3}$$