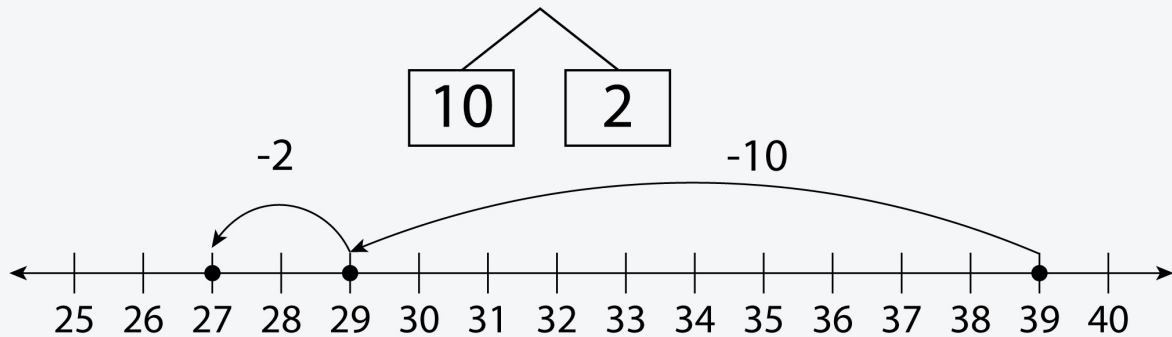


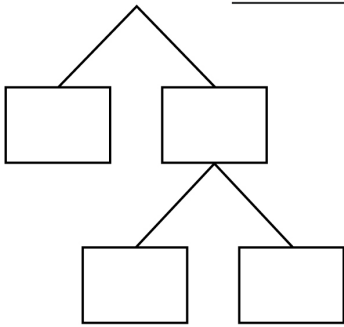
# Break Apart and Subtract

Break apart the number you are subtracting. Write the difference.

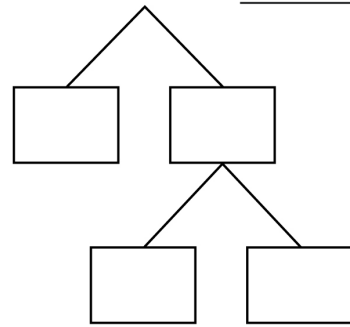
Example:  $39 - 12 = 39 - 12$



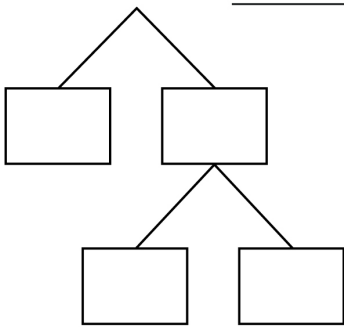
①  $73 - 15 =$  \_\_\_\_\_



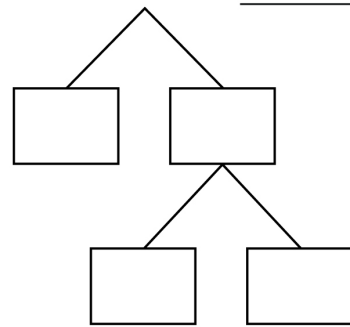
②  $43 - 18 =$  \_\_\_\_\_



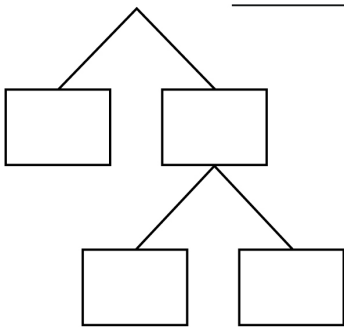
③  $43 - 17 =$  \_\_\_\_\_



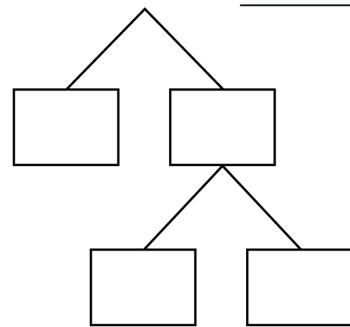
④  $72 - 17 =$  \_\_\_\_\_



⑤  $44 - 16 =$  \_\_\_\_\_



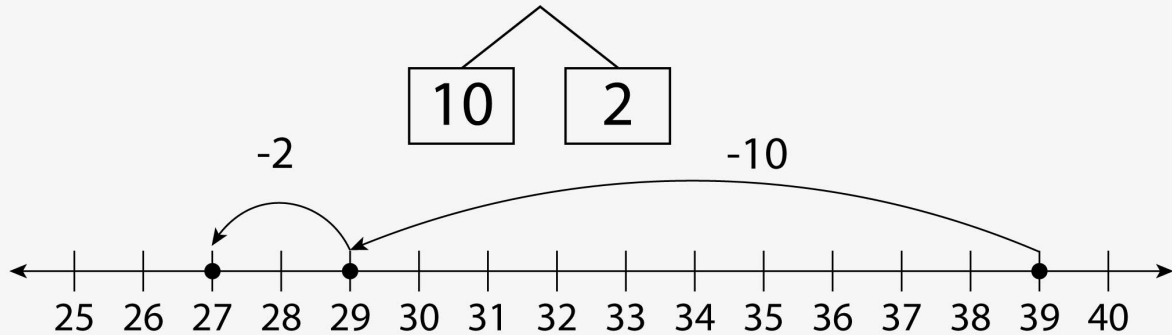
⑥  $83 - 17 =$  \_\_\_\_\_



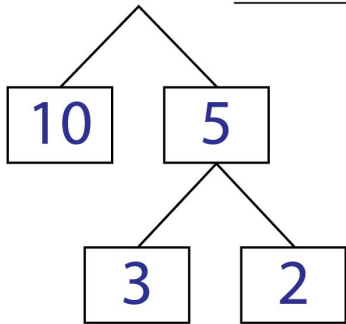
# Break Apart and Subtract

## Answers

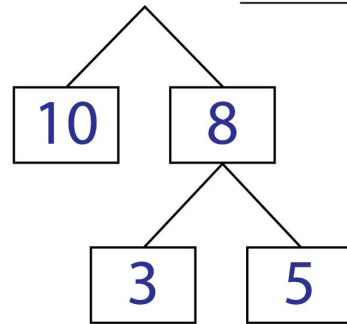
Example:  $39 - 12 = 39 - 12$



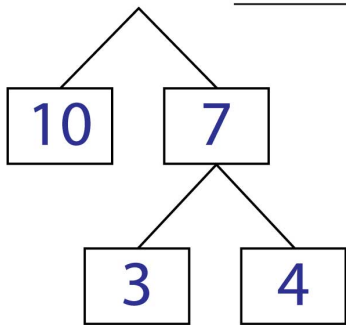
①  $73 - 15 = \underline{58}$



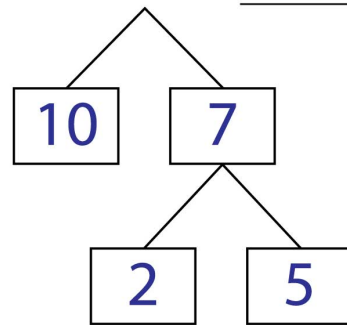
②  $43 - 18 = \underline{25}$



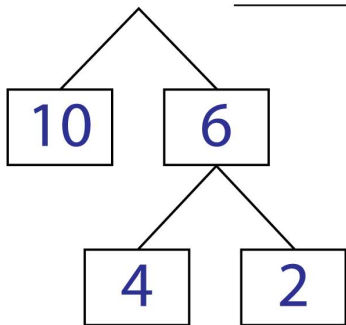
③  $43 - 17 = \underline{26}$



④  $72 - 17 = \underline{55}$



⑤  $44 - 16 = \underline{28}$



⑥  $83 - 17 = \underline{66}$

